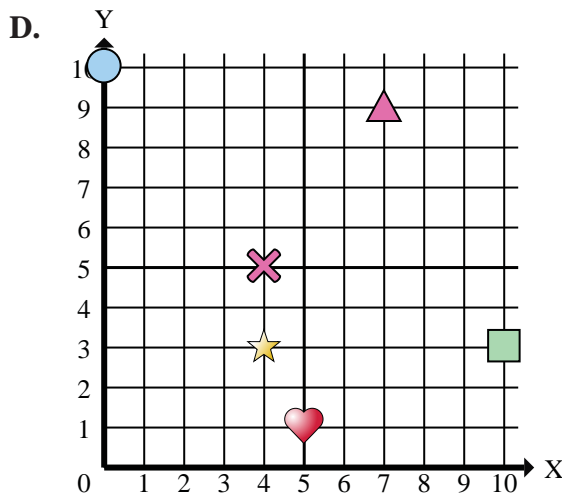
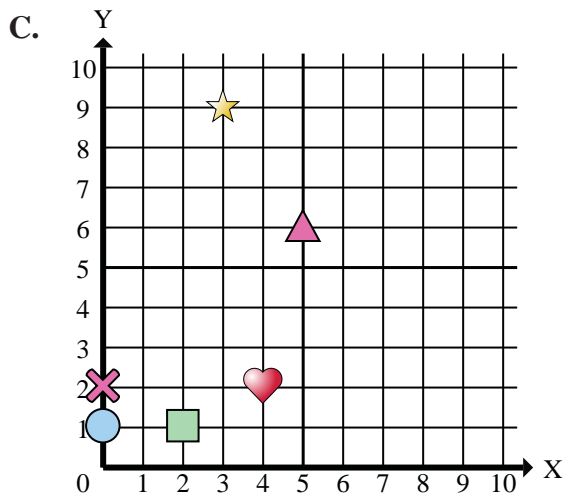
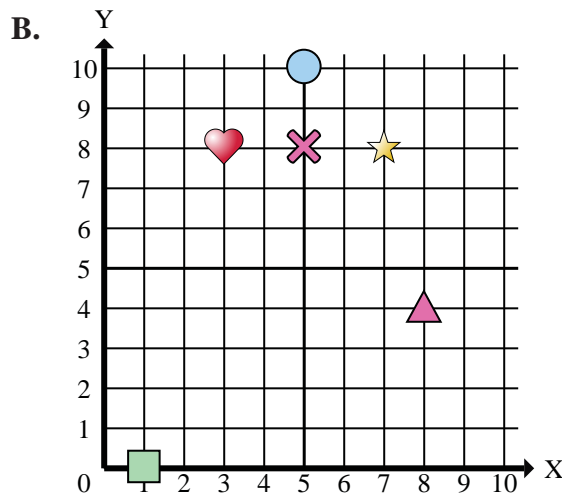
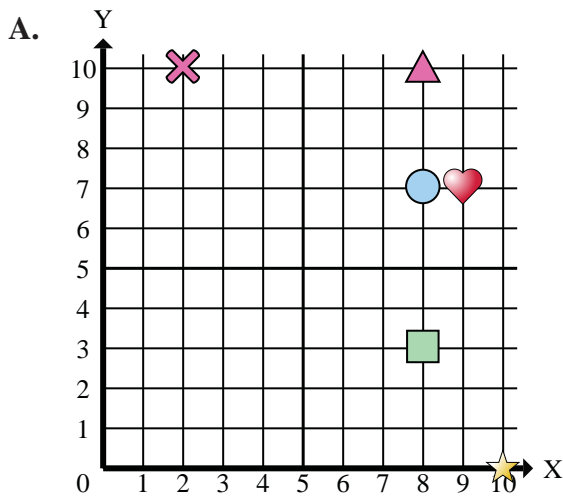




Determine which coordinate plane answers each question.



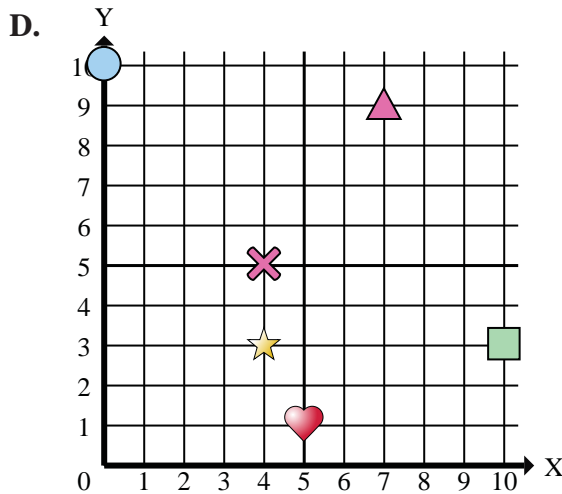
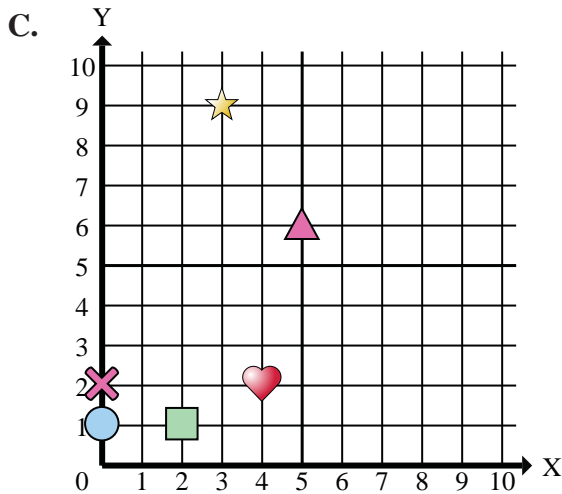
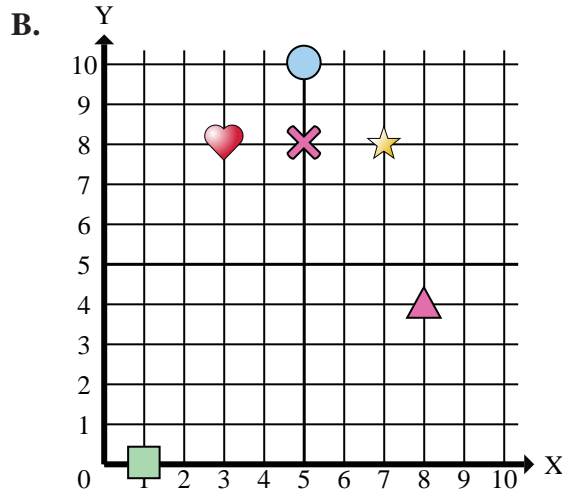
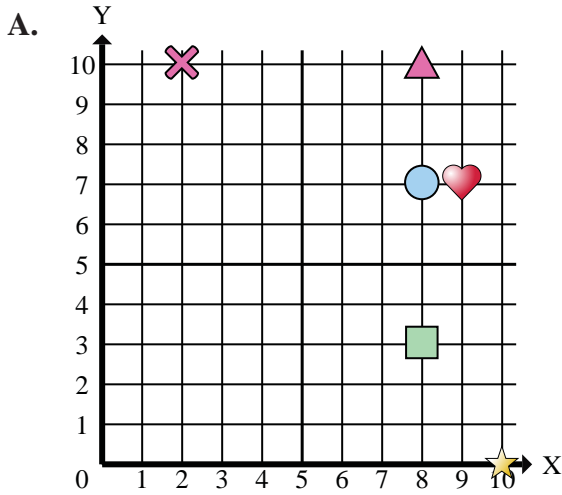
Answers

1. _____
2. _____
3. _____
4. _____
5. _____
6. _____
7. _____
8. _____
9. _____
10. _____
11. _____
12. _____
13. _____
14. _____
15. _____

- 1) Which coordinate plane has a shape at (7 , 8)?
- 2) Which coordinate plane has a shape at (3 , 8)?
- 3) Which coordinate plane has a shape at (5 , 10)?
- 4) Which coordinate plane has a shape at (2 , 10)?
- 5) Which coordinate plane has a shape at (5 , 1)?
- 6) Which coordinate plane has a shape at (5 , 8)?
- 7) Which coordinate plane has a shape at (8 , 4)?
- 8) Which coordinate plane has a shape at (5 , 6)?
- 9) Which coordinate plane has a shape at (4 , 5)?
- 10) Which coordinate plane has a shape at (0 , 10)?
- 11) Which coordinate plane has a shape at (8 , 3)?
- 12) Which coordinate plane has a shape at (1 , 0)?
- 13) Which coordinate plane has a shape at (2 , 1)?
- 14) Which coordinate plane has a shape at (7 , 9)?
- 15) Which coordinate plane has a shape at (4 , 2)?



Determine which coordinate plane answers each question.



Answers

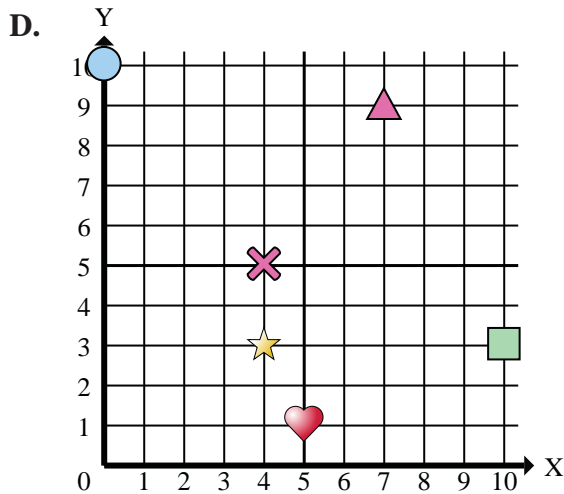
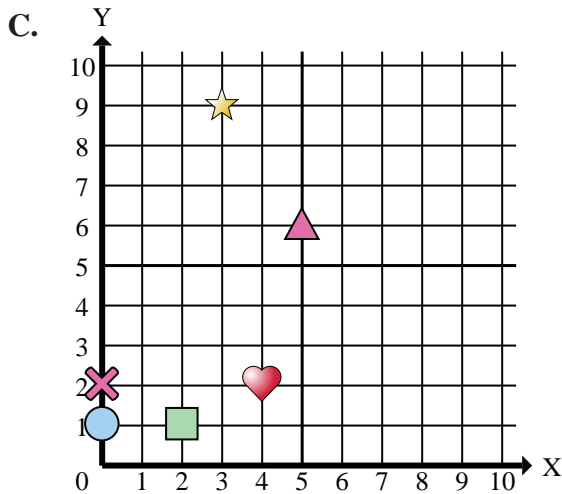
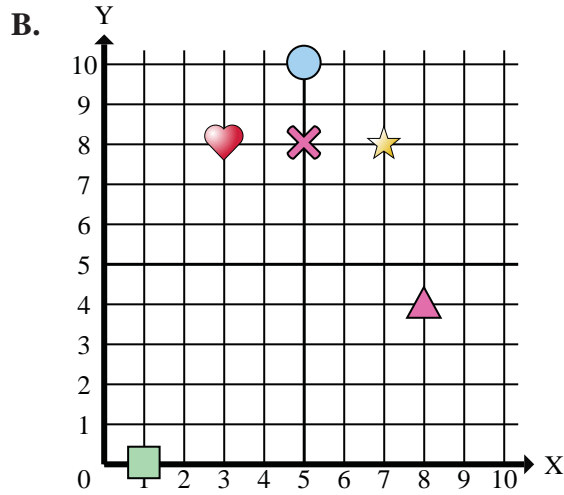
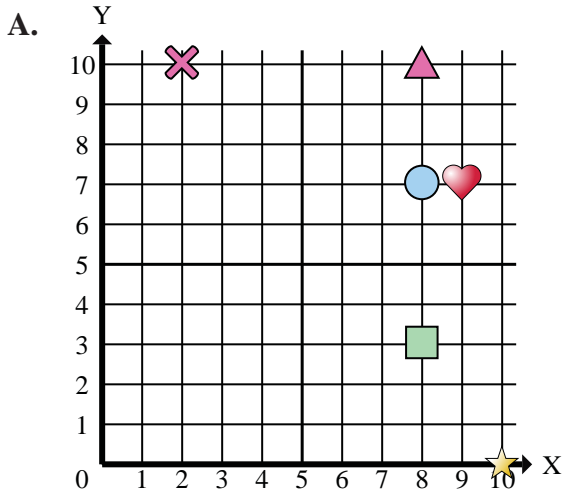
1. **B**
2. **B**
3. **B**
4. **A**
5. **D**
6. **B**
7. **B**
8. **C**
9. **D**
10. **D**
11. **A**
12. **B**
13. **C**
14. **D**
15. **C**

- 1) Which coordinate plane has a shape at (7 , 8)?
- 2) Which coordinate plane has a shape at (3 , 8)?
- 3) Which coordinate plane has a shape at (5 , 10)?
- 4) Which coordinate plane has a shape at (2 , 10)?
- 5) Which coordinate plane has a shape at (5 , 1)?
- 6) Which coordinate plane has a shape at (5 , 8)?
- 7) Which coordinate plane has a shape at (8 , 4)?
- 8) Which coordinate plane has a shape at (5 , 6)?
- 9) Which coordinate plane has a shape at (4 , 5)?
- 10) Which coordinate plane has a shape at (0 , 10)?
- 11) Which coordinate plane has a shape at (8 , 3)?
- 12) Which coordinate plane has a shape at (1 , 0)?
- 13) Which coordinate plane has a shape at (2 , 1)?
- 14) Which coordinate plane has a shape at (7 , 9)?
- 15) Which coordinate plane has a shape at (4 , 2)?



Determine which coordinate plane answers each question.

Answers

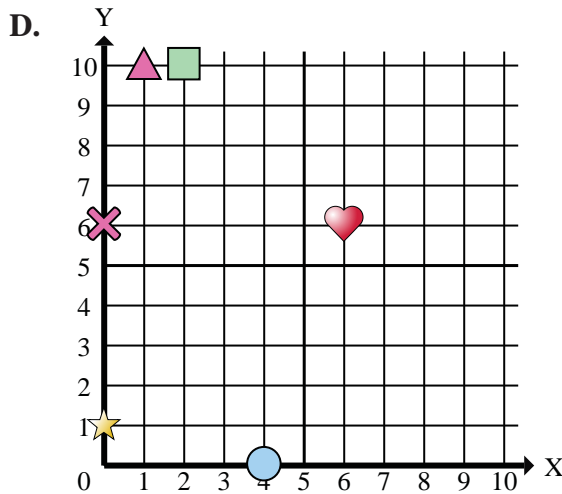
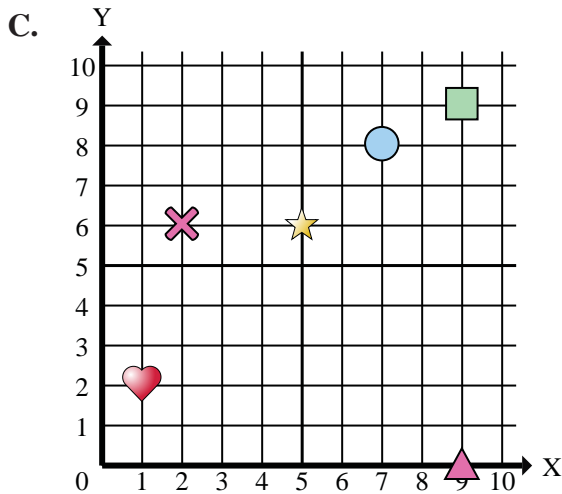
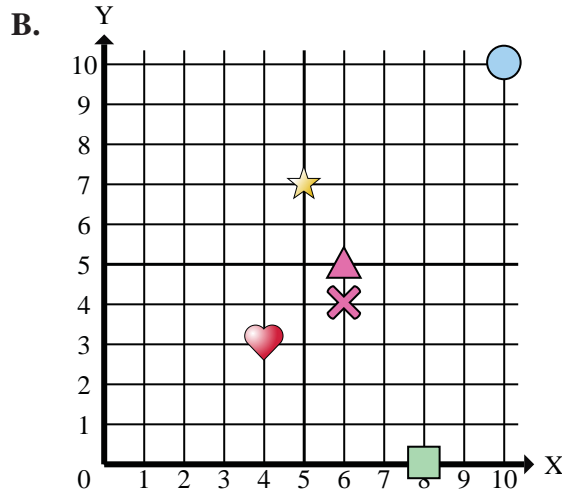
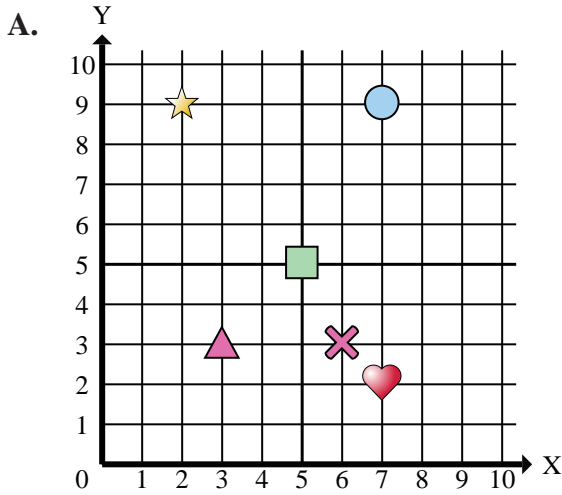


1. _____
2. _____
3. _____
4. _____
5. _____
6. _____
7. _____
8. _____
9. _____
10. _____

- 1) Which coordinate plane has a star at (7 , 8)?
- 2) Which coordinate plane has a heart at (3 , 8)?
- 3) Which coordinate plane has a circle at (5 , 10)?
- 4) Which coordinate plane has a cross at (2 , 10)?
- 5) Which coordinate plane has a heart at (5 , 1)?
- 6) Which coordinate plane has a cross at (5 , 8)?
- 7) Which coordinate plane has a triangle at (8 , 4)?
- 8) Which coordinate plane has a triangle at (5 , 6)?
- 9) Which coordinate plane has a cross at (4 , 5)?
- 10) Which coordinate plane has a circle at (0 , 10)?



Determine which coordinate plane answers each question.



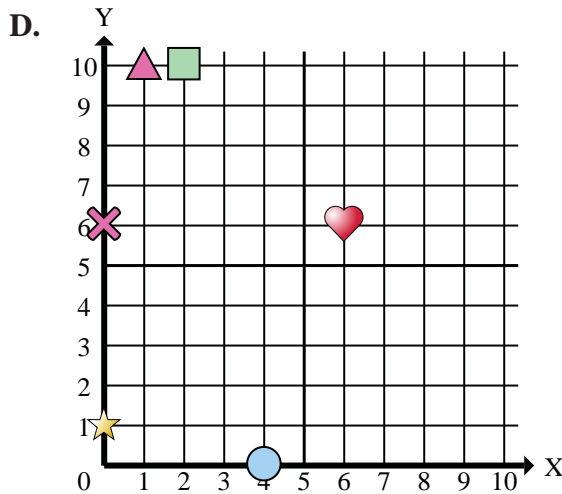
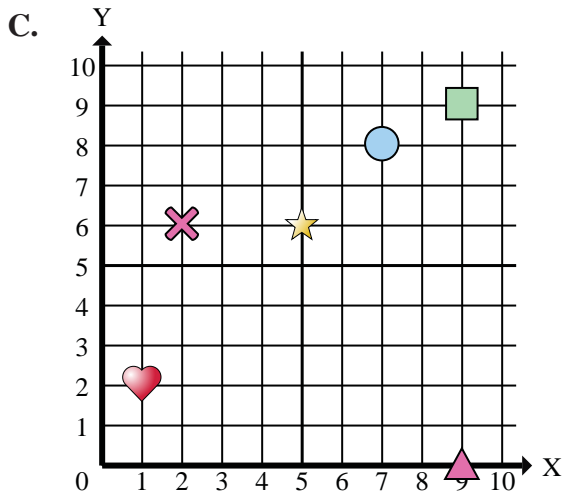
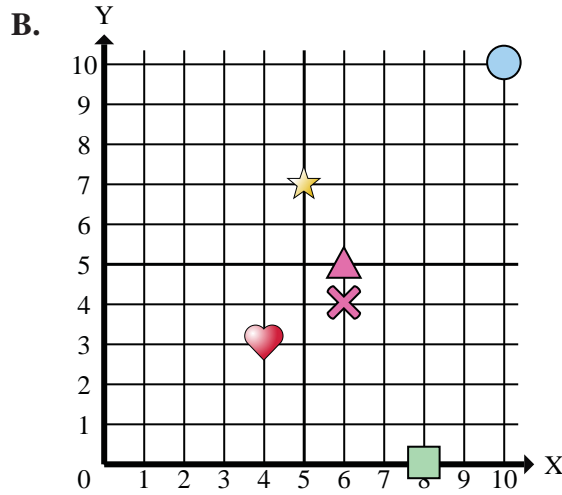
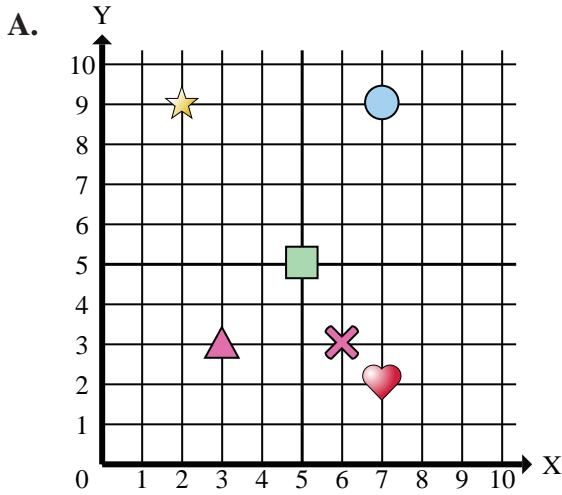
Answers

1. _____
2. _____
3. _____
4. _____
5. _____
6. _____
7. _____
8. _____
9. _____
10. _____
11. _____
12. _____
13. _____
14. _____
15. _____

- 1) Which coordinate plane has a shape at (10 , 10)?
- 2) Which coordinate plane has a shape at (6 , 5)?
- 3) Which coordinate plane has a shape at (2 , 6)?
- 4) Which coordinate plane has a shape at (5 , 7)?
- 5) Which coordinate plane has a shape at (6 , 3)?
- 6) Which coordinate plane has a shape at (7 , 2)?
- 7) Which coordinate plane has a shape at (7 , 9)?
- 8) Which coordinate plane has a shape at (6 , 6)?
- 9) Which coordinate plane has a shape at (4 , 0)?
- 10) Which coordinate plane has a shape at (6 , 4)?
- 11) Which coordinate plane has a shape at (9 , 9)?
- 12) Which coordinate plane has a shape at (3 , 3)?
- 13) Which coordinate plane has a shape at (1 , 2)?
- 14) Which coordinate plane has a shape at (0 , 1)?
- 15) Which coordinate plane has a shape at (5 , 5)?



Determine which coordinate plane answers each question.



Answers

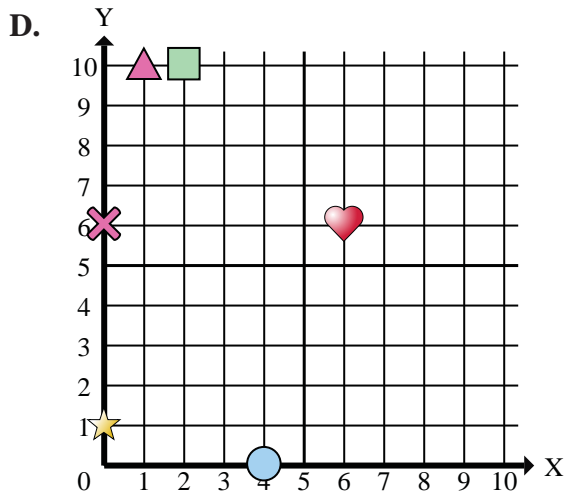
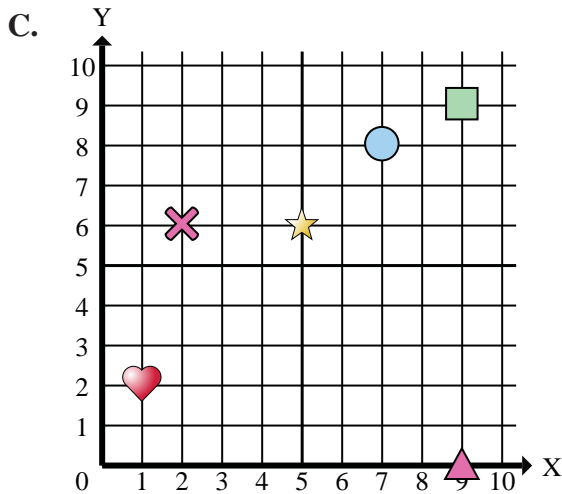
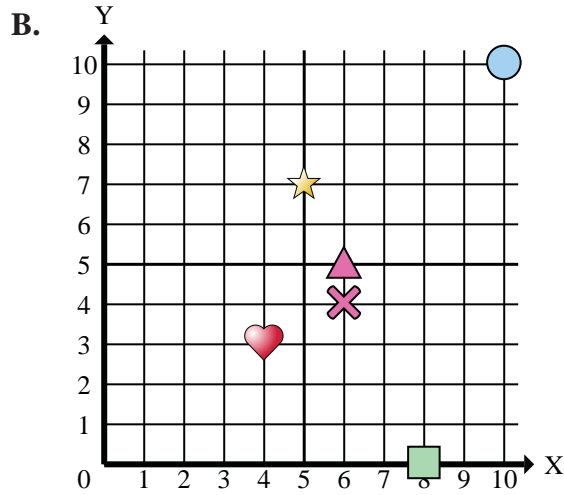
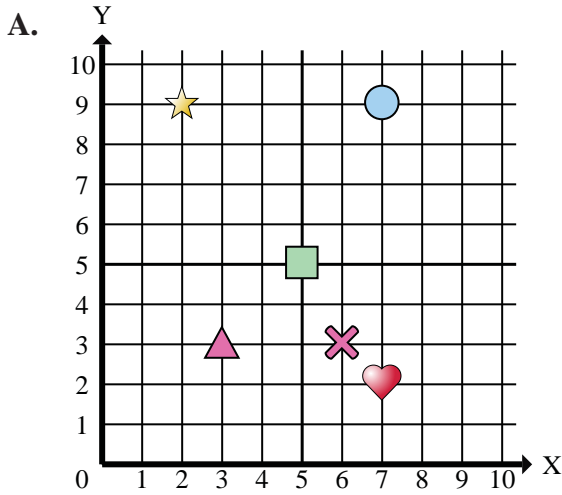
1. **B**
2. **B**
3. **C**
4. **B**
5. **A**
6. **A**
7. **A**
8. **D**
9. **D**
10. **B**
11. **C**
12. **A**
13. **C**
14. **D**
15. **A**

- 1) Which coordinate plane has a shape at (10 , 10)?
- 2) Which coordinate plane has a shape at (6 , 5)?
- 3) Which coordinate plane has a shape at (2 , 6)?
- 4) Which coordinate plane has a shape at (5 , 7)?
- 5) Which coordinate plane has a shape at (6 , 3)?
- 6) Which coordinate plane has a shape at (7 , 2)?
- 7) Which coordinate plane has a shape at (7 , 9)?
- 8) Which coordinate plane has a shape at (6 , 6)?
- 9) Which coordinate plane has a shape at (4 , 0)?
- 10) Which coordinate plane has a shape at (6 , 4)?
- 11) Which coordinate plane has a shape at (9 , 9)?
- 12) Which coordinate plane has a shape at (3 , 3)?
- 13) Which coordinate plane has a shape at (1 , 2)?
- 14) Which coordinate plane has a shape at (0 , 1)?
- 15) Which coordinate plane has a shape at (5 , 5)?



Determine which coordinate plane answers each question.

Answers

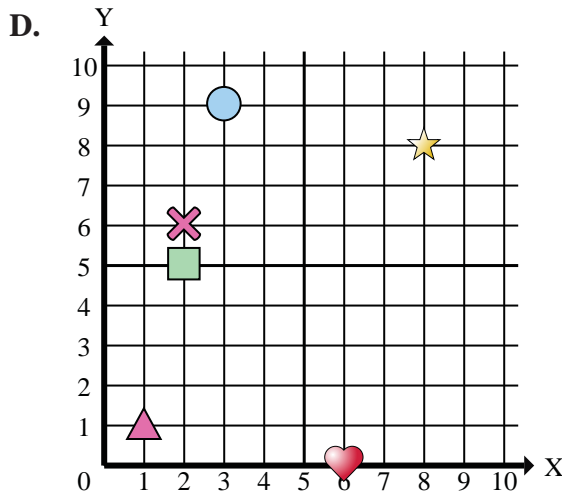
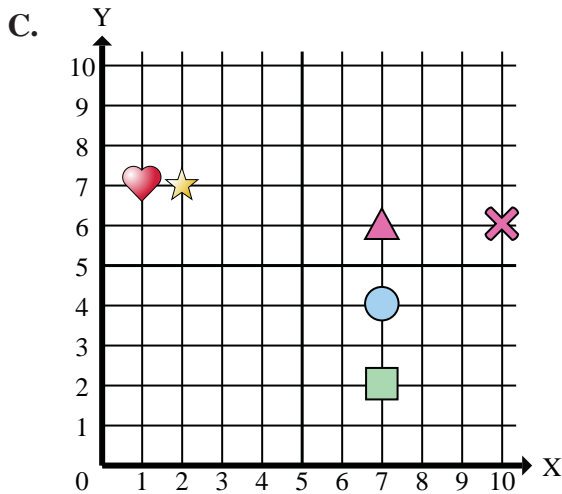
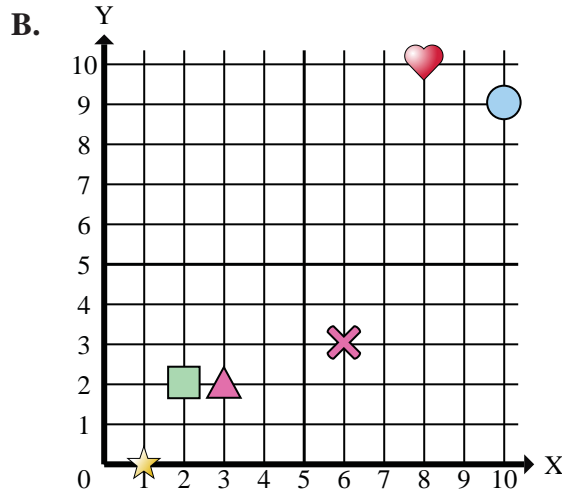
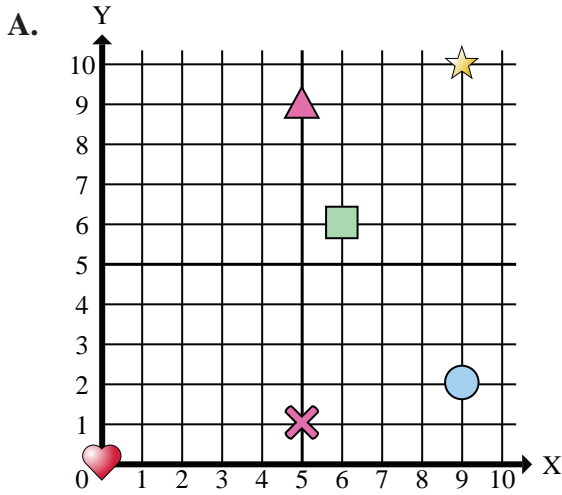


1. _____
2. _____
3. _____
4. _____
5. _____
6. _____
7. _____
8. _____
9. _____
10. _____

- 1) Which coordinate plane has a circle at (10 , 10)?
- 2) Which coordinate plane has a triangle at (6 , 5)?
- 3) Which coordinate plane has a cross at (2 , 6)?
- 4) Which coordinate plane has a star at (5 , 7)?
- 5) Which coordinate plane has a cross at (6 , 3)?
- 6) Which coordinate plane has a heart at (7 , 2)?
- 7) Which coordinate plane has a circle at (7 , 9)?
- 8) Which coordinate plane has a heart at (6 , 6)?
- 9) Which coordinate plane has a circle at (4 , 0)?
- 10) Which coordinate plane has a cross at (6 , 4)?



Determine which coordinate plane answers each question.



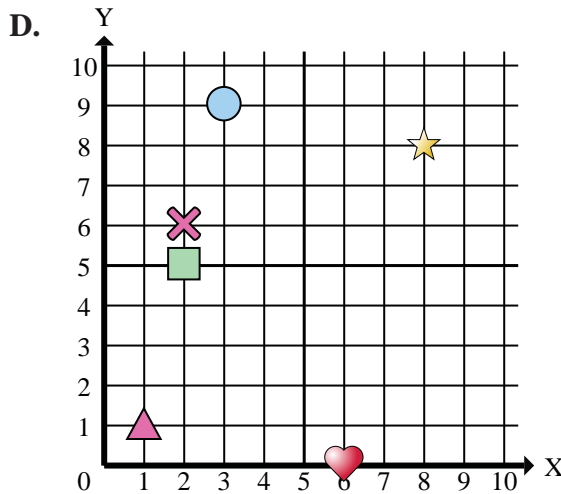
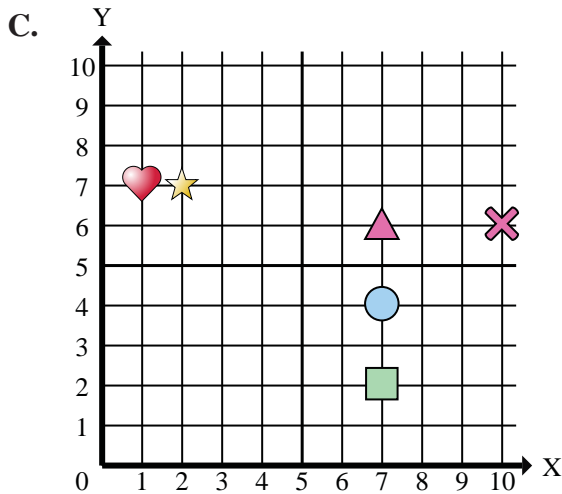
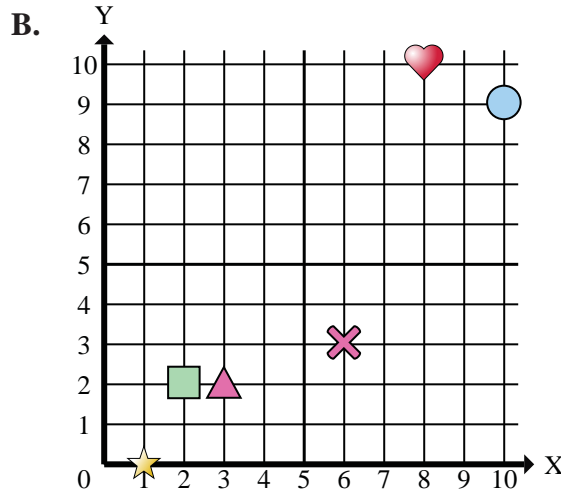
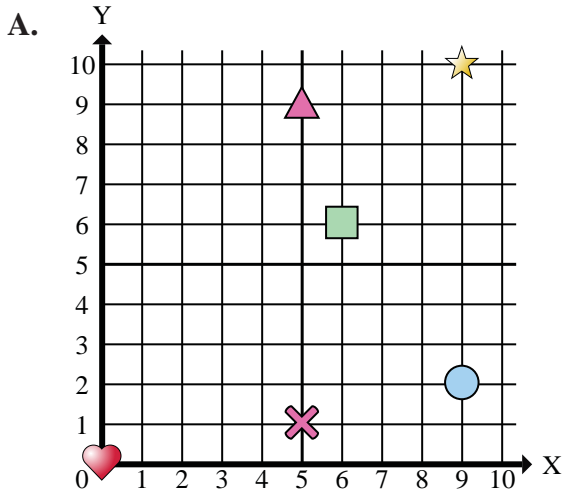
Answers

1. _____
2. _____
3. _____
4. _____
5. _____
6. _____
7. _____
8. _____
9. _____
10. _____
11. _____
12. _____
13. _____
14. _____
15. _____

- 1) Which coordinate plane has a shape at (2 , 5)?
- 2) Which coordinate plane has a shape at (6 , 6)?
- 3) Which coordinate plane has a shape at (6 , 3)?
- 4) Which coordinate plane has a shape at (2 , 2)?
- 5) Which coordinate plane has a shape at (0 , 0)?
- 6) Which coordinate plane has a shape at (1 , 7)?
- 7) Which coordinate plane has a shape at (1 , 0)?
- 8) Which coordinate plane has a shape at (3 , 9)?
- 9) Which coordinate plane has a shape at (3 , 2)?
- 10) Which coordinate plane has a shape at (9 , 10)?
- 11) Which coordinate plane has a shape at (7 , 2)?
- 12) Which coordinate plane has a shape at (10 , 6)?
- 13) Which coordinate plane has a shape at (7 , 6)?
- 14) Which coordinate plane has a shape at (2 , 6)?
- 15) Which coordinate plane has a shape at (1 , 1)?



Determine which coordinate plane answers each question.



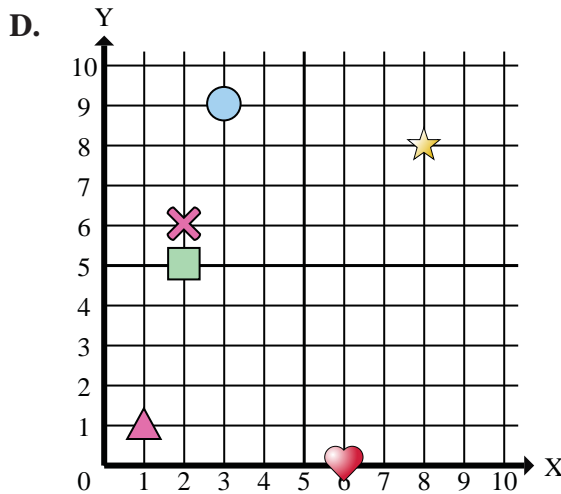
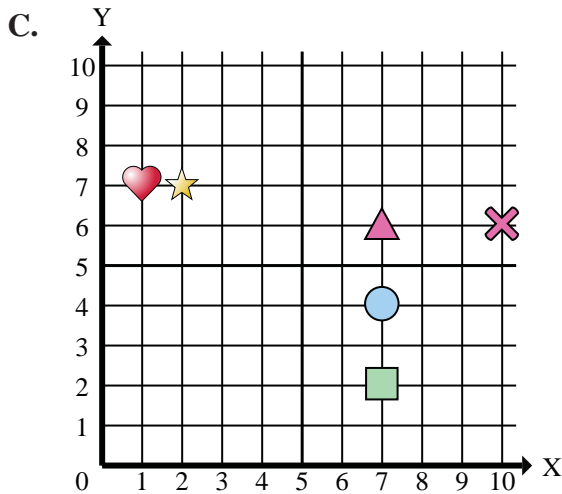
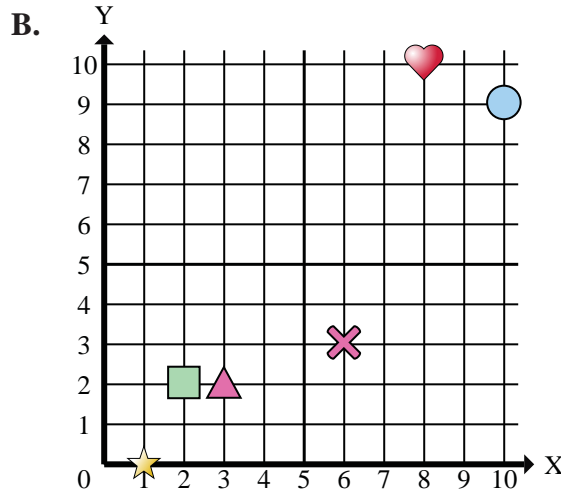
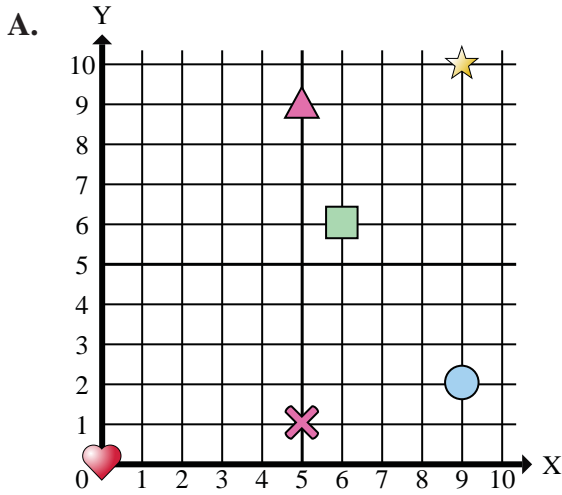
Answers

1. **D**
2. **A**
3. **B**
4. **B**
5. **A**
6. **C**
7. **B**
8. **D**
9. **B**
10. **A**
11. **C**
12. **C**
13. **C**
14. **D**
15. **D**

- 1) Which coordinate plane has a shape at (2 , 5)?
- 2) Which coordinate plane has a shape at (6 , 6)?
- 3) Which coordinate plane has a shape at (6 , 3)?
- 4) Which coordinate plane has a shape at (2 , 2)?
- 5) Which coordinate plane has a shape at (0 , 0)?
- 6) Which coordinate plane has a shape at (1 , 7)?
- 7) Which coordinate plane has a shape at (1 , 0)?
- 8) Which coordinate plane has a shape at (3 , 9)?
- 9) Which coordinate plane has a shape at (3 , 2)?
- 10) Which coordinate plane has a shape at (9 , 10)?
- 11) Which coordinate plane has a shape at (7 , 2)?
- 12) Which coordinate plane has a shape at (10 , 6)?
- 13) Which coordinate plane has a shape at (7 , 6)?
- 14) Which coordinate plane has a shape at (2 , 6)?
- 15) Which coordinate plane has a shape at (1 , 1)?



Determine which coordinate plane answers each question.



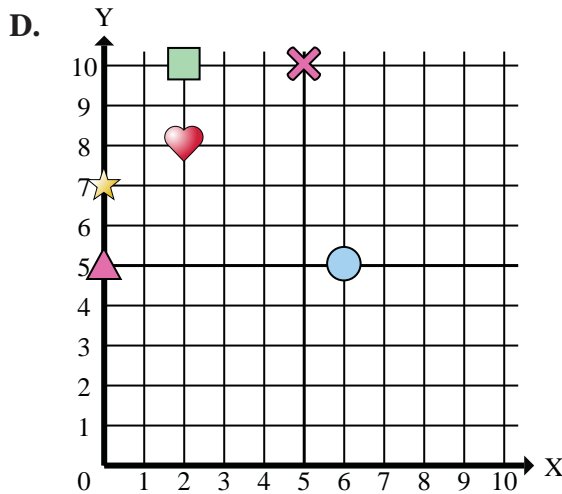
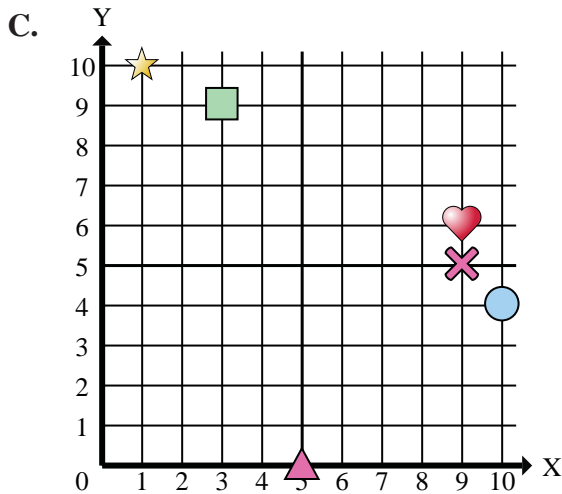
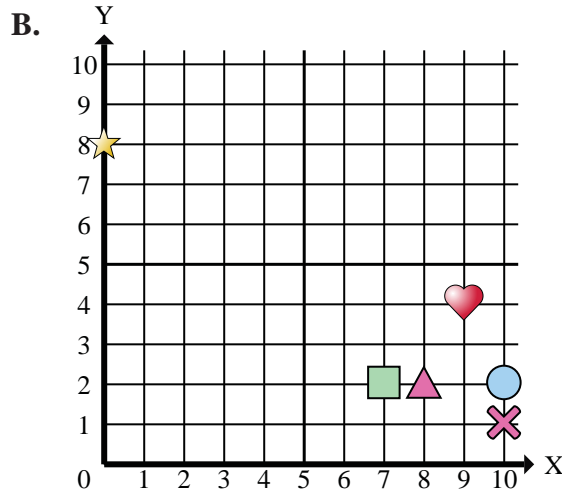
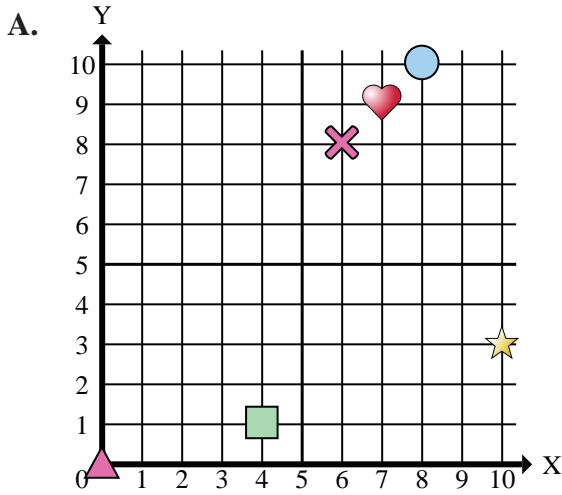
Answers

1. _____
2. _____
3. _____
4. _____
5. _____
6. _____
7. _____
8. _____
9. _____
10. _____

- 1) Which coordinate plane has a rectangle at (2 , 5)?
- 2) Which coordinate plane has a rectangle at (6 , 6)?
- 3) Which coordinate plane has a cross at (6 , 3)?
- 4) Which coordinate plane has a rectangle at (2 , 2)?
- 5) Which coordinate plane has a heart at (0 , 0)?
- 6) Which coordinate plane has a heart at (1 , 7)?
- 7) Which coordinate plane has a star at (1 , 0)?
- 8) Which coordinate plane has a circle at (3 , 9)?
- 9) Which coordinate plane has a triangle at (3 , 2)?
- 10) Which coordinate plane has a star at (9 , 10)?



Determine which coordinate plane answers each question.



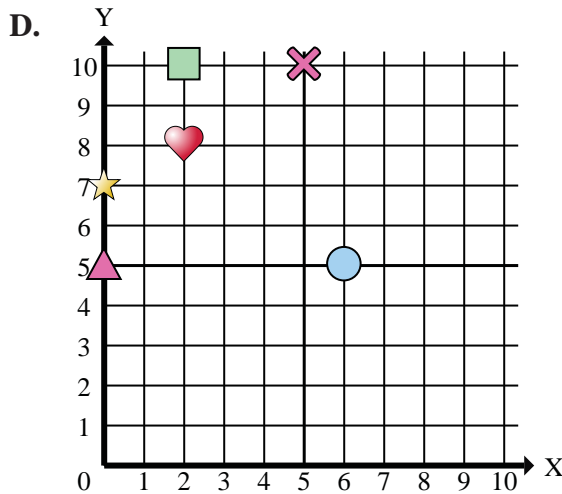
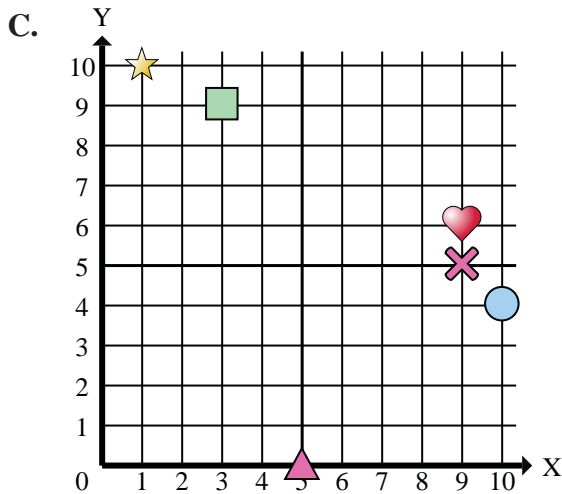
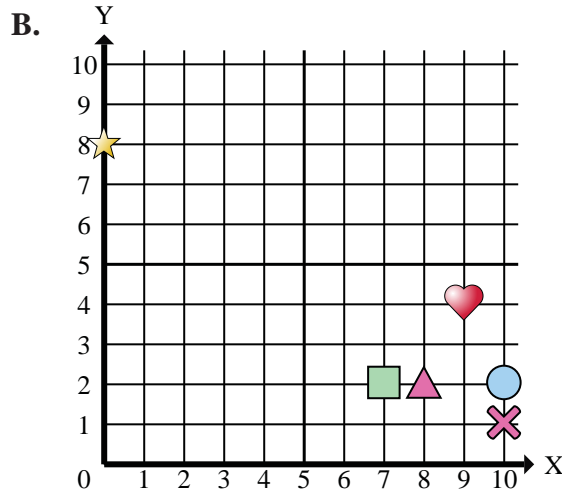
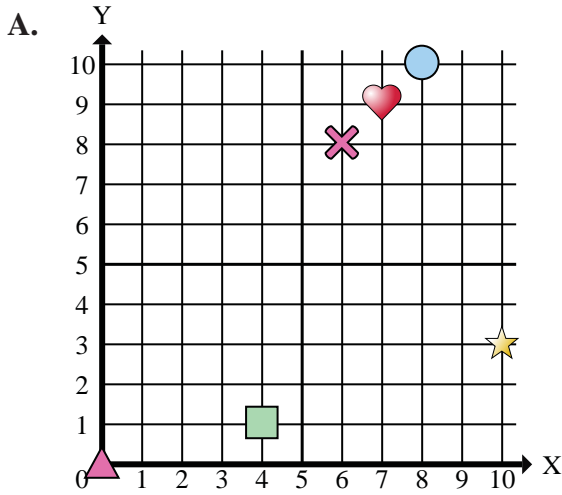
Answers

1. _____
2. _____
3. _____
4. _____
5. _____
6. _____
7. _____
8. _____
9. _____
10. _____
11. _____
12. _____
13. _____
14. _____
15. _____

- 1) Which coordinate plane has a shape at (3 , 9)?
- 2) Which coordinate plane has a shape at (1 , 10)?
- 3) Which coordinate plane has a shape at (9 , 6)?
- 4) Which coordinate plane has a shape at (5 , 0)?
- 5) Which coordinate plane has a shape at (10 , 4)?
- 6) Which coordinate plane has a shape at (2 , 8)?
- 7) Which coordinate plane has a shape at (9 , 4)?
- 8) Which coordinate plane has a shape at (6 , 8)?
- 9) Which coordinate plane has a shape at (0 , 8)?
- 10) Which coordinate plane has a shape at (7 , 9)?
- 11) Which coordinate plane has a shape at (10 , 1)?
- 12) Which coordinate plane has a shape at (8 , 2)?
- 13) Which coordinate plane has a shape at (6 , 5)?
- 14) Which coordinate plane has a shape at (2 , 10)?
- 15) Which coordinate plane has a shape at (4 , 1)?



Determine which coordinate plane answers each question.



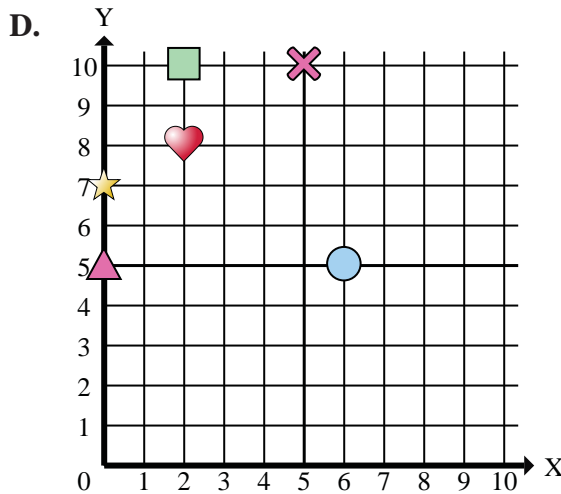
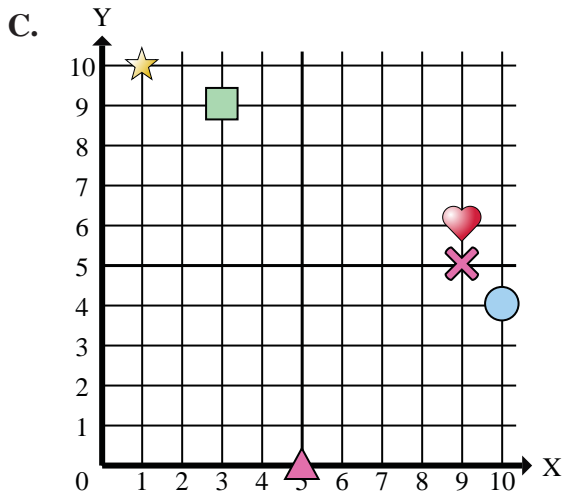
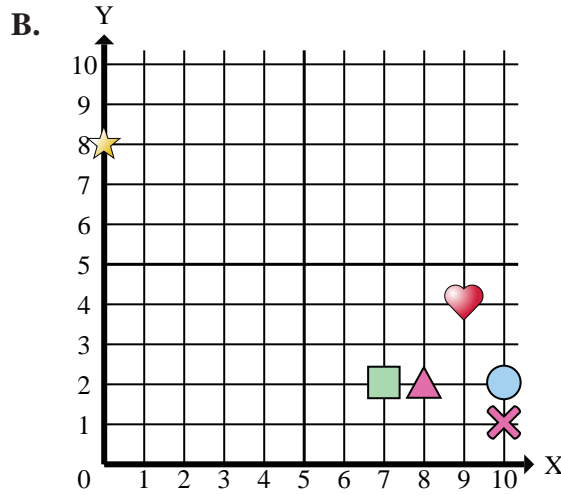
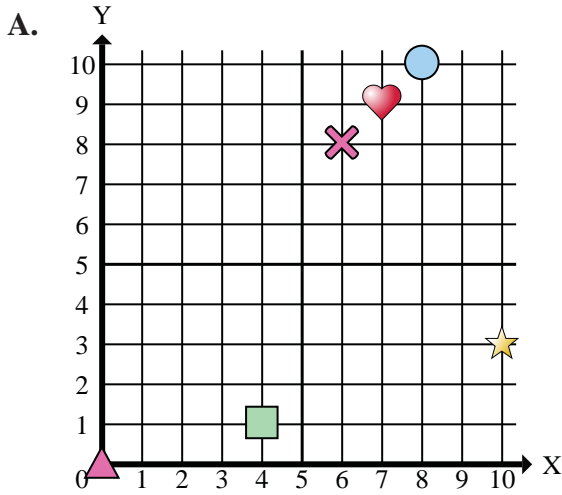
Answers

1. **C**
2. **C**
3. **C**
4. **C**
5. **C**
6. **D**
7. **B**
8. **A**
9. **B**
10. **A**
11. **B**
12. **B**
13. **D**
14. **D**
15. **A**

- 1) Which coordinate plane has a shape at (3 , 9)?
- 2) Which coordinate plane has a shape at (1 , 10)?
- 3) Which coordinate plane has a shape at (9 , 6)?
- 4) Which coordinate plane has a shape at (5 , 0)?
- 5) Which coordinate plane has a shape at (10 , 4)?
- 6) Which coordinate plane has a shape at (2 , 8)?
- 7) Which coordinate plane has a shape at (9 , 4)?
- 8) Which coordinate plane has a shape at (6 , 8)?
- 9) Which coordinate plane has a shape at (0 , 8)?
- 10) Which coordinate plane has a shape at (7 , 9)?
- 11) Which coordinate plane has a shape at (10 , 1)?
- 12) Which coordinate plane has a shape at (8 , 2)?
- 13) Which coordinate plane has a shape at (6 , 5)?
- 14) Which coordinate plane has a shape at (2 , 10)?
- 15) Which coordinate plane has a shape at (4 , 1)?



Determine which coordinate plane answers each question.



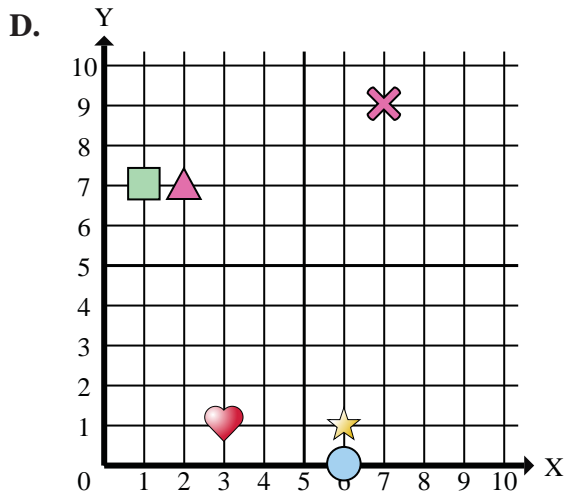
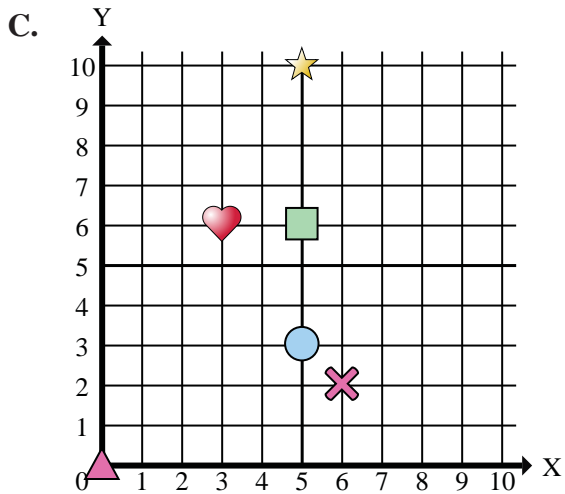
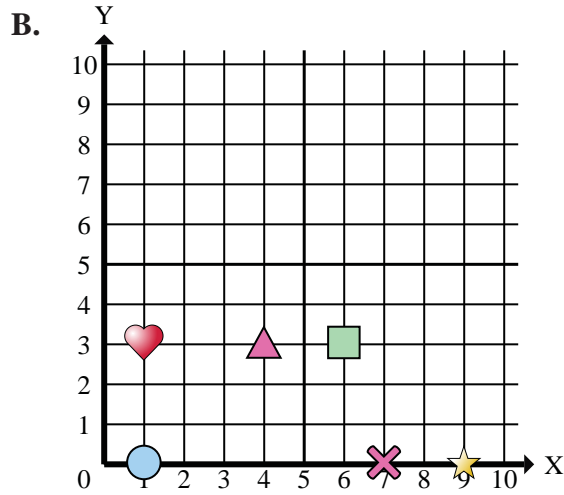
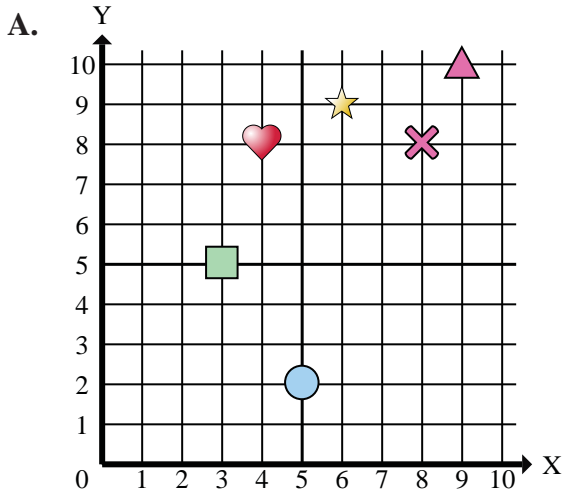
Answers

1. _____
2. _____
3. _____
4. _____
5. _____
6. _____
7. _____
8. _____
9. _____
10. _____

- 1) Which coordinate plane has a rectangle at (3 , 9)?
- 2) Which coordinate plane has a star at (1 , 10)?
- 3) Which coordinate plane has a heart at (9 , 6)?
- 4) Which coordinate plane has a triangle at (5 , 0)?
- 5) Which coordinate plane has a circle at (10 , 4)?
- 6) Which coordinate plane has a heart at (2 , 8)?
- 7) Which coordinate plane has a heart at (9 , 4)?
- 8) Which coordinate plane has a cross at (6 , 8)?
- 9) Which coordinate plane has a star at (0 , 8)?
- 10) Which coordinate plane has a heart at (7 , 9)?



Determine which coordinate plane answers each question.



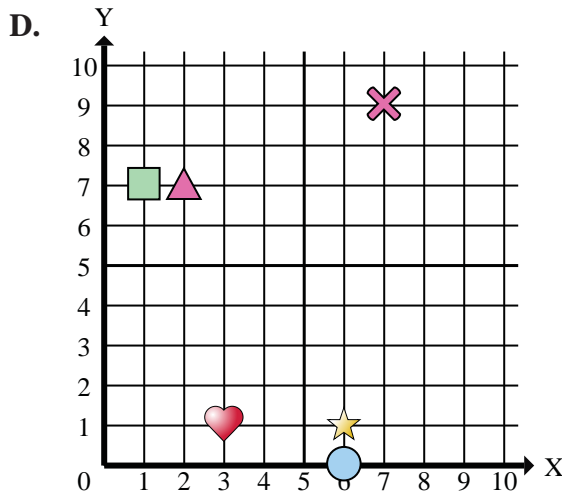
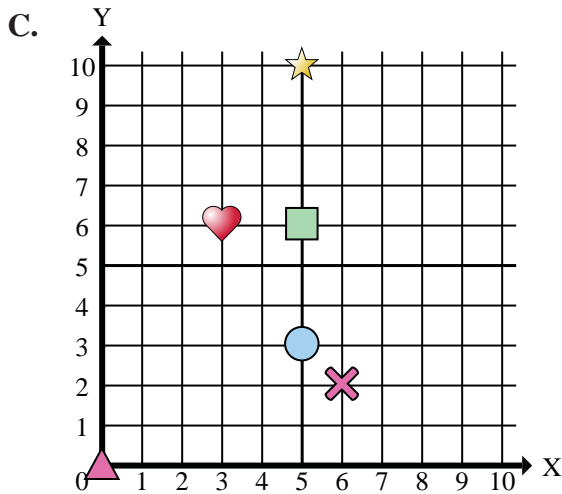
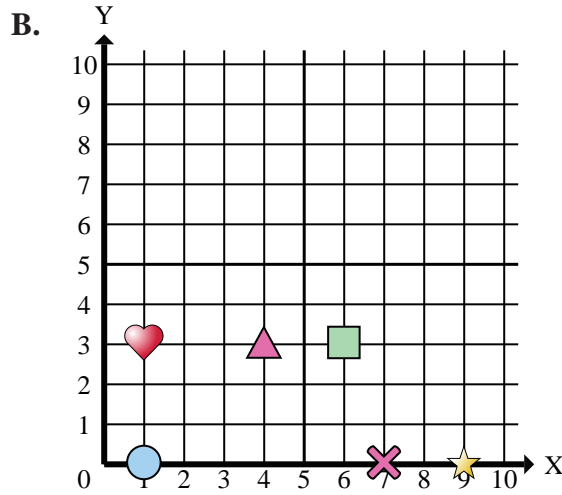
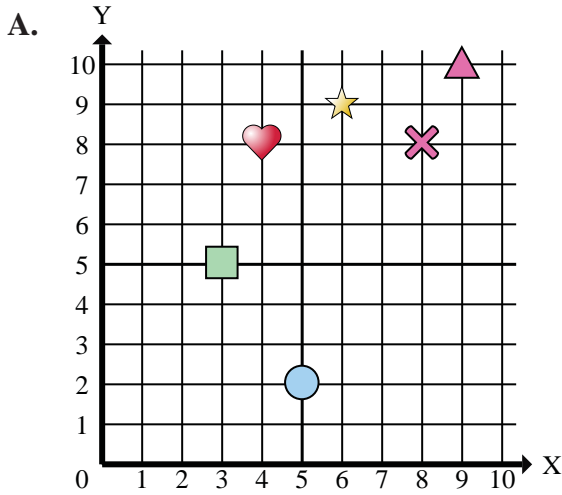
Answers

1. _____
2. _____
3. _____
4. _____
5. _____
6. _____
7. _____
8. _____
9. _____
10. _____
11. _____
12. _____
13. _____
14. _____
15. _____

- 1) Which coordinate plane has a shape at (5 , 3)?
- 2) Which coordinate plane has a shape at (5 , 6)?
- 3) Which coordinate plane has a shape at (1 , 7)?
- 4) Which coordinate plane has a shape at (5 , 2)?
- 5) Which coordinate plane has a shape at (4 , 8)?
- 6) Which coordinate plane has a shape at (1 , 3)?
- 7) Which coordinate plane has a shape at (3 , 5)?
- 8) Which coordinate plane has a shape at (7 , 0)?
- 9) Which coordinate plane has a shape at (7 , 9)?
- 10) Which coordinate plane has a shape at (6 , 3)?
- 11) Which coordinate plane has a shape at (6 , 1)?
- 12) Which coordinate plane has a shape at (3 , 1)?
- 13) Which coordinate plane has a shape at (3 , 6)?
- 14) Which coordinate plane has a shape at (1 , 0)?
- 15) Which coordinate plane has a shape at (6 , 0)?



Determine which coordinate plane answers each question.



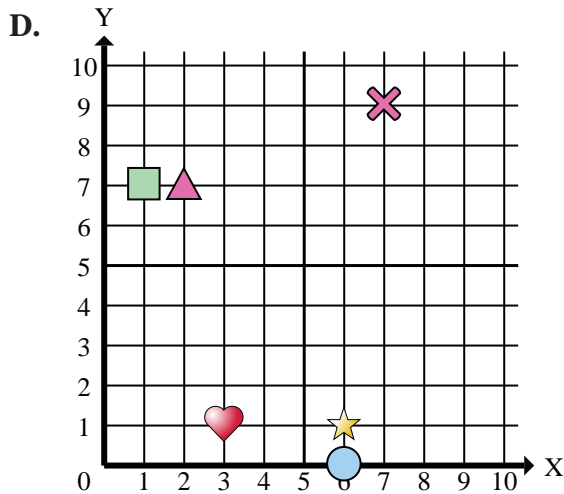
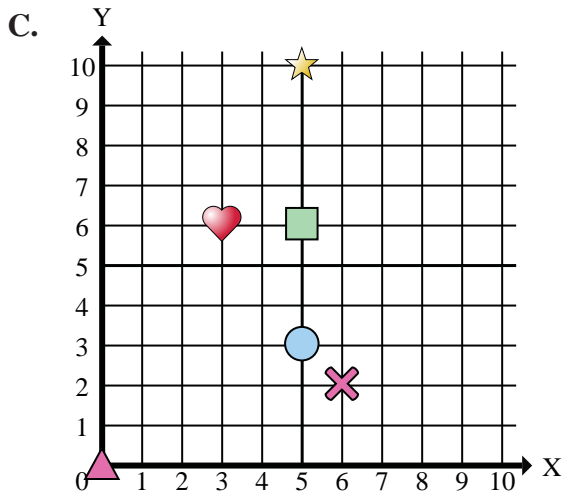
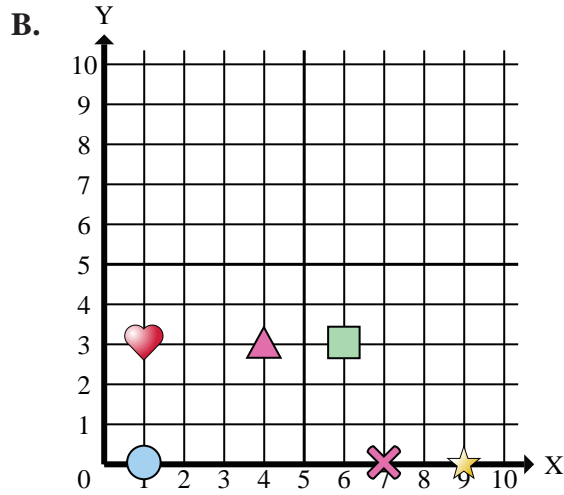
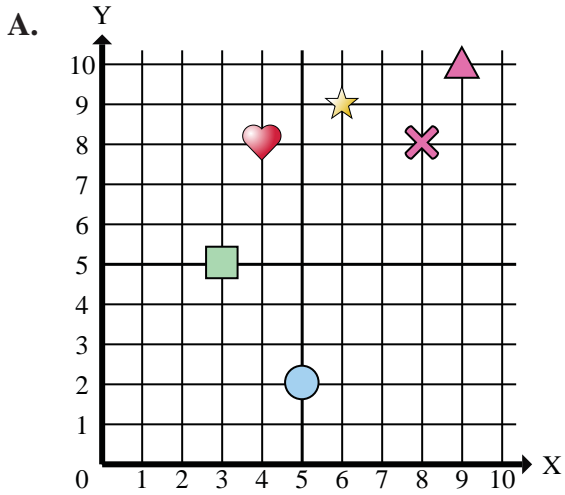
Answers

1. **C**
2. **C**
3. **D**
4. **A**
5. **A**
6. **B**
7. **A**
8. **B**
9. **D**
10. **B**
11. **D**
12. **D**
13. **C**
14. **B**
15. **D**

- 1) Which coordinate plane has a shape at (5 , 3)?
- 2) Which coordinate plane has a shape at (5 , 6)?
- 3) Which coordinate plane has a shape at (1 , 7)?
- 4) Which coordinate plane has a shape at (5 , 2)?
- 5) Which coordinate plane has a shape at (4 , 8)?
- 6) Which coordinate plane has a shape at (1 , 3)?
- 7) Which coordinate plane has a shape at (3 , 5)?
- 8) Which coordinate plane has a shape at (7 , 0)?
- 9) Which coordinate plane has a shape at (7 , 9)?
- 10) Which coordinate plane has a shape at (6 , 3)?
- 11) Which coordinate plane has a shape at (6 , 1)?
- 12) Which coordinate plane has a shape at (3 , 1)?
- 13) Which coordinate plane has a shape at (3 , 6)?
- 14) Which coordinate plane has a shape at (1 , 0)?
- 15) Which coordinate plane has a shape at (6 , 0)?



Determine which coordinate plane answers each question.



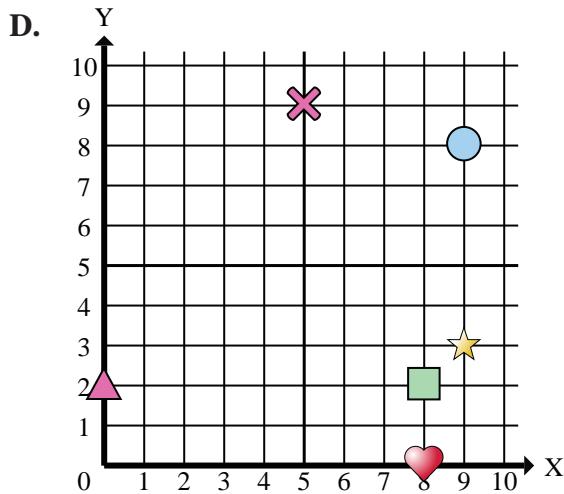
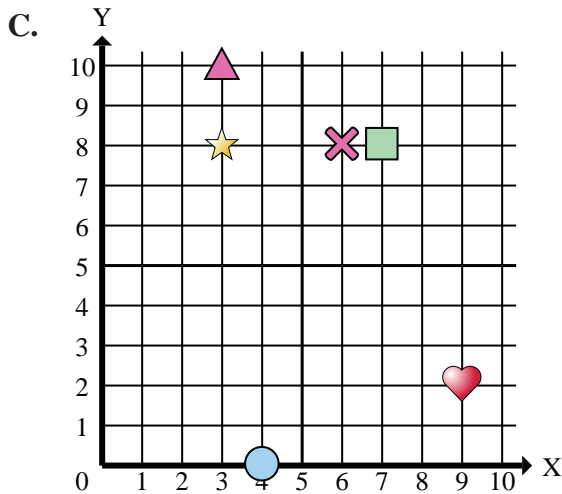
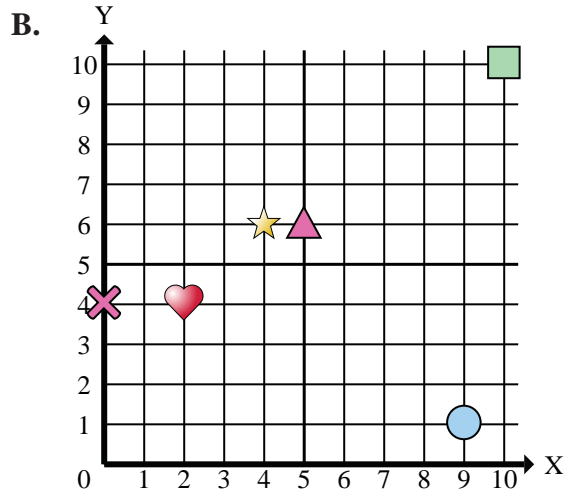
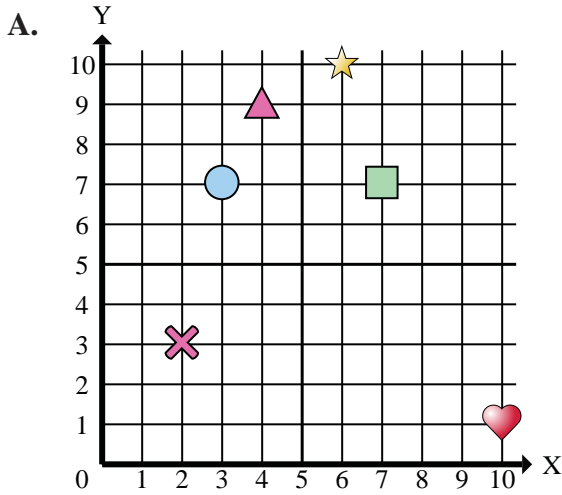
Answers

1. _____
2. _____
3. _____
4. _____
5. _____
6. _____
7. _____
8. _____
9. _____
10. _____

- 1) Which coordinate plane has a circle at (5 , 3)?
- 2) Which coordinate plane has a rectangle at (5 , 6)?
- 3) Which coordinate plane has a rectangle at (1 , 7)?
- 4) Which coordinate plane has a circle at (5 , 2)?
- 5) Which coordinate plane has a heart at (4 , 8)?
- 6) Which coordinate plane has a heart at (1 , 3)?
- 7) Which coordinate plane has a rectangle at (3 , 5)?
- 8) Which coordinate plane has a cross at (7 , 0)?
- 9) Which coordinate plane has a cross at (7 , 9)?
- 10) Which coordinate plane has a rectangle at (6 , 3)?



Determine which coordinate plane answers each question.



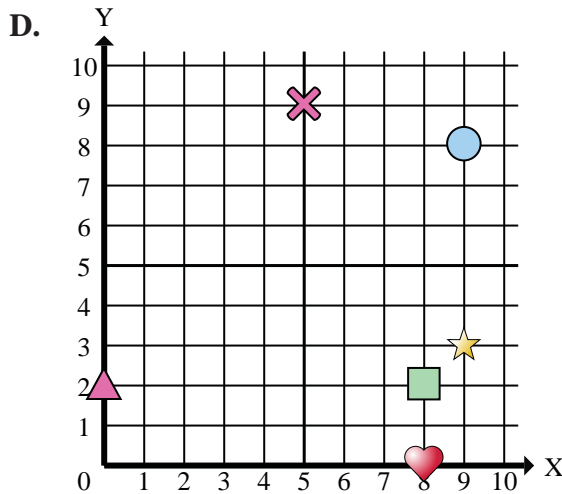
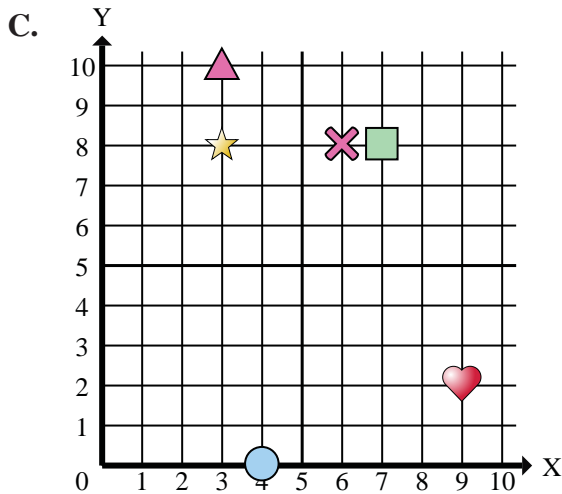
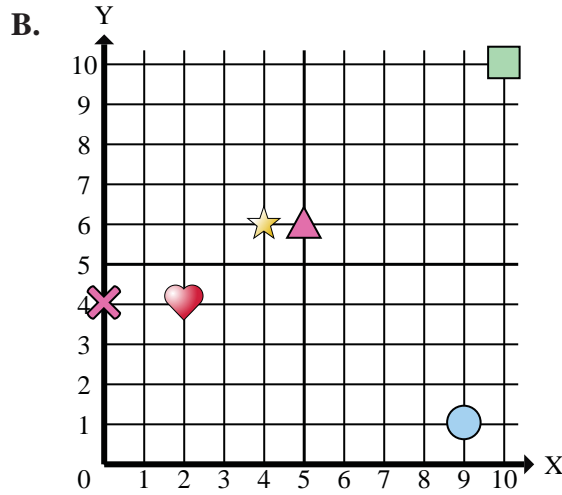
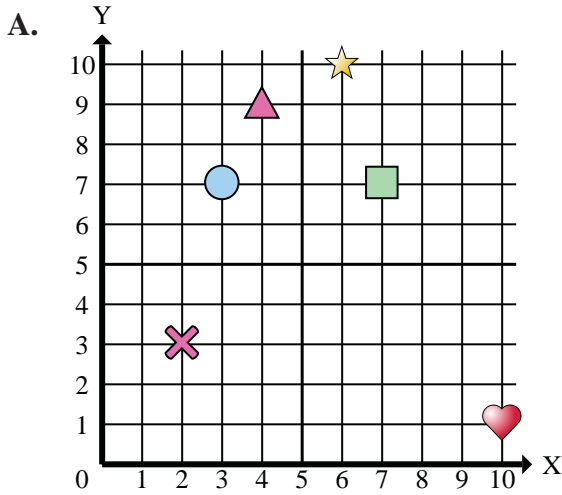
Answers

1. _____
2. _____
3. _____
4. _____
5. _____
6. _____
7. _____
8. _____
9. _____
10. _____
11. _____
12. _____
13. _____
14. _____
15. _____

- 1) Which coordinate plane has a shape at (9 , 1)?
- 2) Which coordinate plane has a shape at (3 , 10)?
- 3) Which coordinate plane has a shape at (7 , 8)?
- 4) Which coordinate plane has a shape at (8 , 2)?
- 5) Which coordinate plane has a shape at (2 , 4)?
- 6) Which coordinate plane has a shape at (4 , 9)?
- 7) Which coordinate plane has a shape at (10 , 10)?
- 8) Which coordinate plane has a shape at (5 , 6)?
- 9) Which coordinate plane has a shape at (6 , 8)?
- 10) Which coordinate plane has a shape at (4 , 6)?
- 11) Which coordinate plane has a shape at (6 , 10)?
- 12) Which coordinate plane has a shape at (9 , 3)?
- 13) Which coordinate plane has a shape at (3 , 8)?
- 14) Which coordinate plane has a shape at (9 , 2)?
- 15) Which coordinate plane has a shape at (8 , 0)?



Determine which coordinate plane answers each question.



Answers

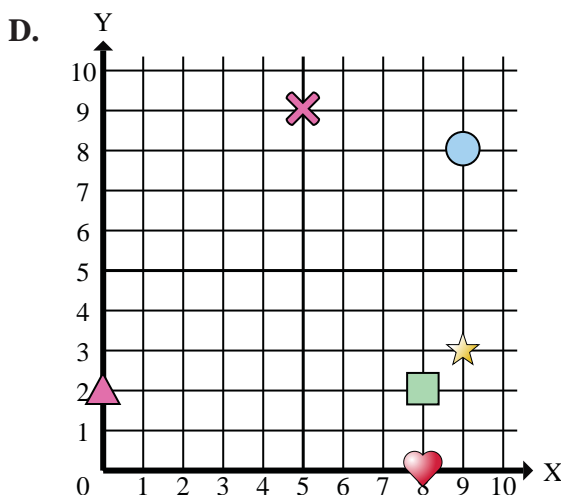
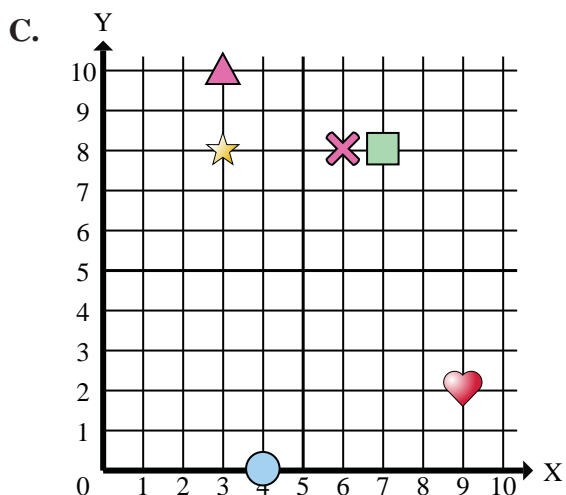
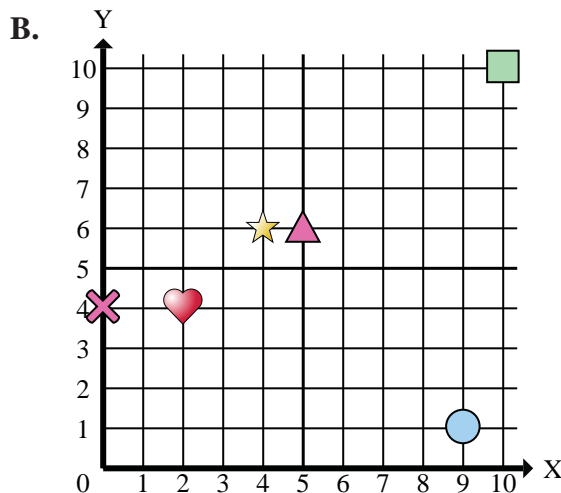
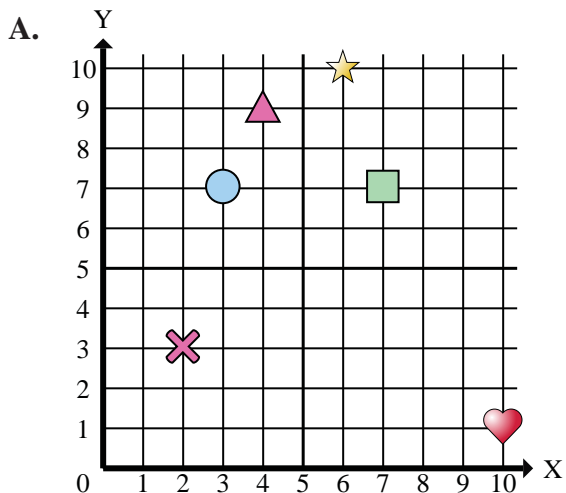
1. **B**
2. **C**
3. **C**
4. **D**
5. **B**
6. **A**
7. **B**
8. **B**
9. **C**
10. **B**
11. **A**
12. **D**
13. **C**
14. **C**
15. **D**

- 1) Which coordinate plane has a shape at (9 , 1)?
- 2) Which coordinate plane has a shape at (3 , 10)?
- 3) Which coordinate plane has a shape at (7 , 8)?
- 4) Which coordinate plane has a shape at (8 , 2)?
- 5) Which coordinate plane has a shape at (2 , 4)?
- 6) Which coordinate plane has a shape at (4 , 9)?
- 7) Which coordinate plane has a shape at (10 , 10)?
- 8) Which coordinate plane has a shape at (5 , 6)?
- 9) Which coordinate plane has a shape at (6 , 8)?
- 10) Which coordinate plane has a shape at (4 , 6)?
- 11) Which coordinate plane has a shape at (6 , 10)?
- 12) Which coordinate plane has a shape at (9 , 3)?
- 13) Which coordinate plane has a shape at (3 , 8)?
- 14) Which coordinate plane has a shape at (9 , 2)?
- 15) Which coordinate plane has a shape at (8 , 0)?



Determine which coordinate plane answers each question.

Answers

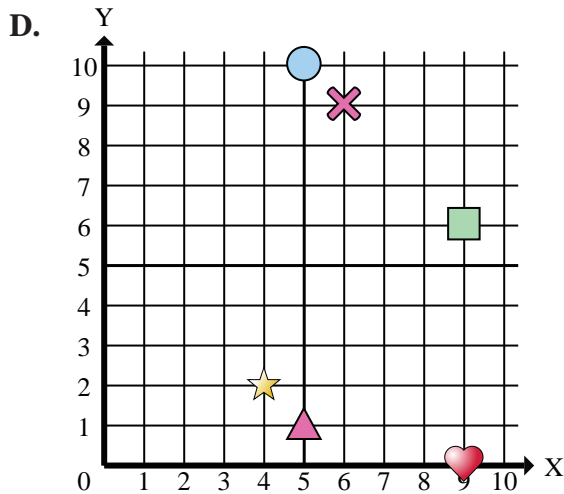
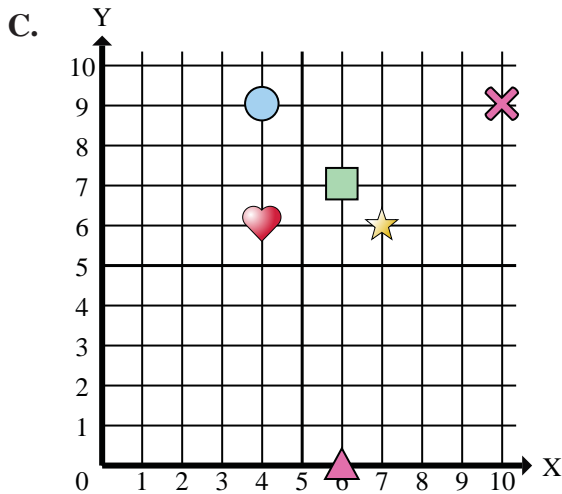
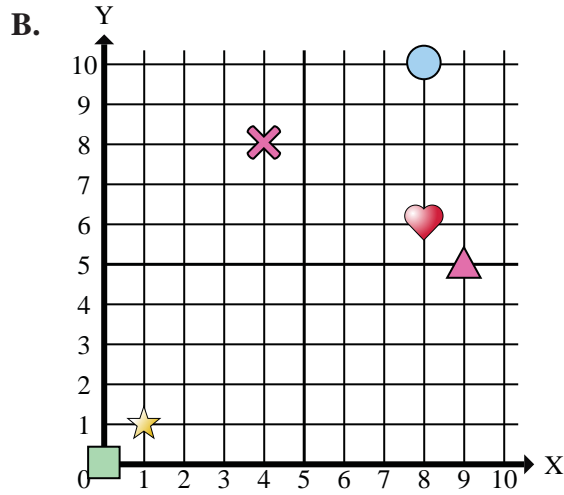
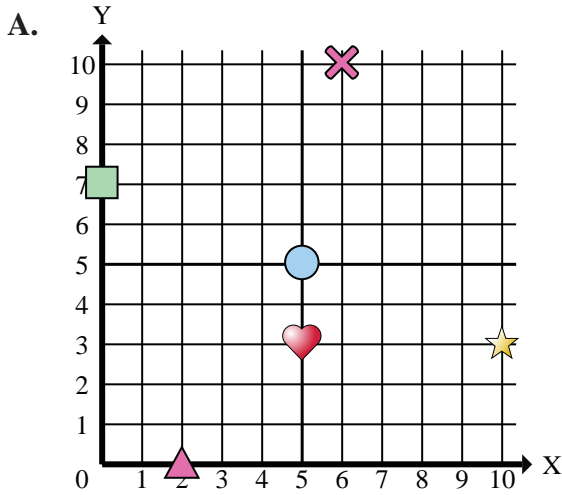


1. _____
2. _____
3. _____
4. _____
5. _____
6. _____
7. _____
8. _____
9. _____
10. _____

- 1) Which coordinate plane has a circle at (9 , 1)?
- 2) Which coordinate plane has a triangle at (3 , 10)?
- 3) Which coordinate plane has a rectangle at (7 , 8)?
- 4) Which coordinate plane has a rectangle at (8 , 2)?
- 5) Which coordinate plane has a heart at (2 , 4)?
- 6) Which coordinate plane has a triangle at (4 , 9)?
- 7) Which coordinate plane has a rectangle at (10 , 10)?
- 8) Which coordinate plane has a triangle at (5 , 6)?
- 9) Which coordinate plane has a cross at (6 , 8)?
- 10) Which coordinate plane has a star at (4 , 6)?



Determine which coordinate plane answers each question.



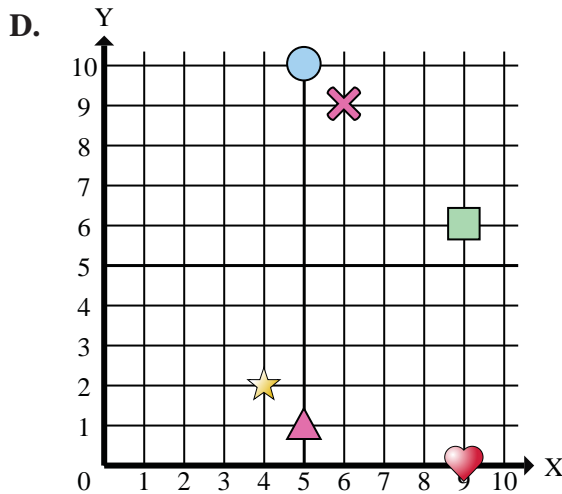
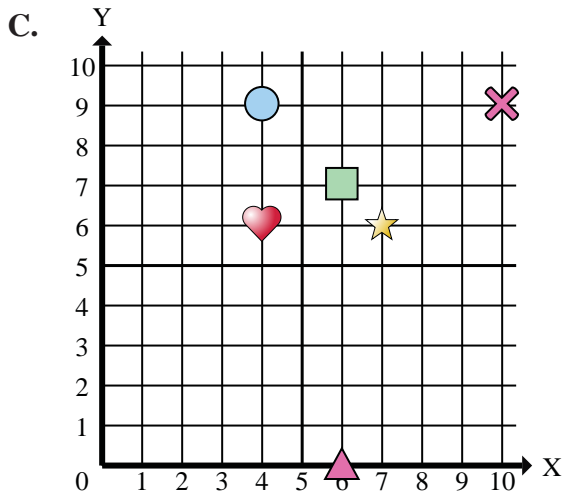
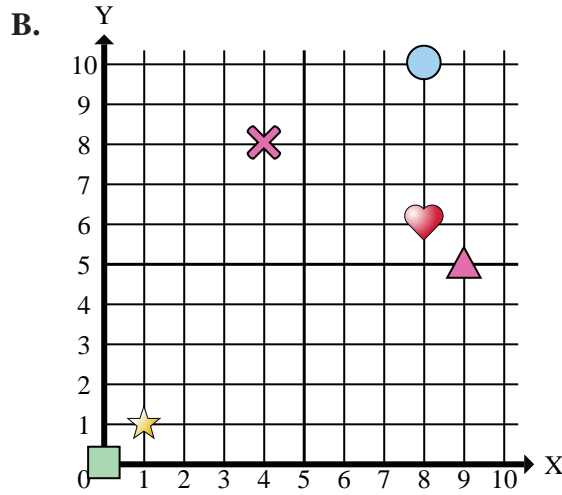
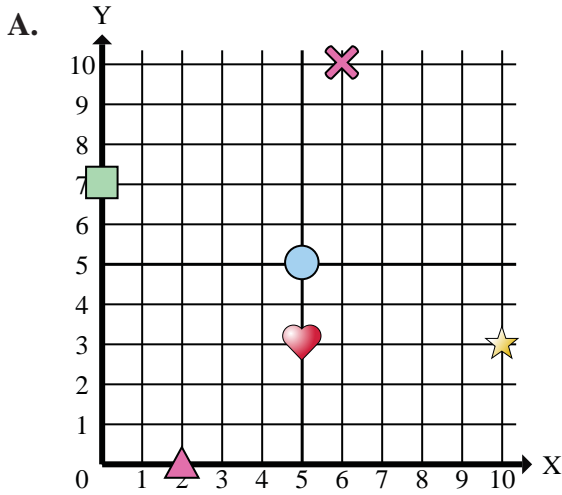
Answers

1. _____
2. _____
3. _____
4. _____
5. _____
6. _____
7. _____
8. _____
9. _____
10. _____
11. _____
12. _____
13. _____
14. _____
15. _____

- 1) Which coordinate plane has a shape at (0 , 0)?
- 2) Which coordinate plane has a shape at (4 , 2)?
- 3) Which coordinate plane has a shape at (5 , 10)?
- 4) Which coordinate plane has a shape at (10 , 3)?
- 5) Which coordinate plane has a shape at (6 , 10)?
- 6) Which coordinate plane has a shape at (1 , 1)?
- 7) Which coordinate plane has a shape at (8 , 10)?
- 8) Which coordinate plane has a shape at (10 , 9)?
- 9) Which coordinate plane has a shape at (2 , 0)?
- 10) Which coordinate plane has a shape at (8 , 6)?
- 11) Which coordinate plane has a shape at (4 , 6)?
- 12) Which coordinate plane has a shape at (5 , 1)?
- 13) Which coordinate plane has a shape at (0 , 7)?
- 14) Which coordinate plane has a shape at (4 , 9)?
- 15) Which coordinate plane has a shape at (9 , 6)?



Determine which coordinate plane answers each question.



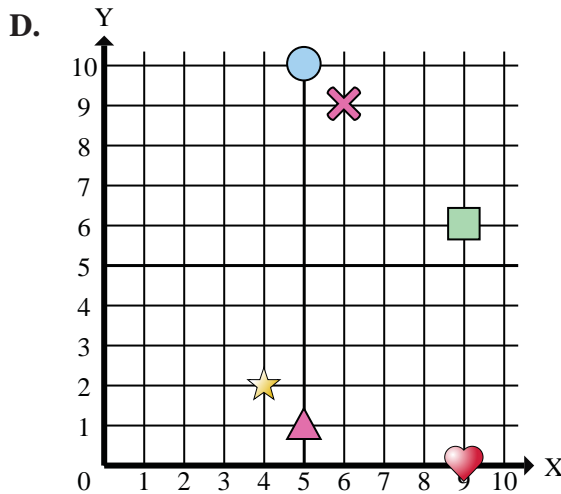
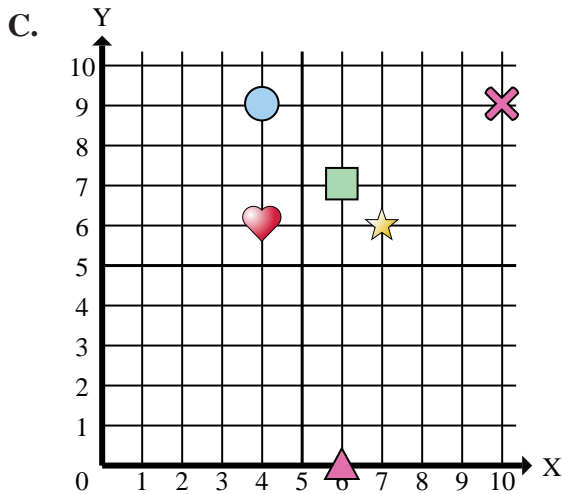
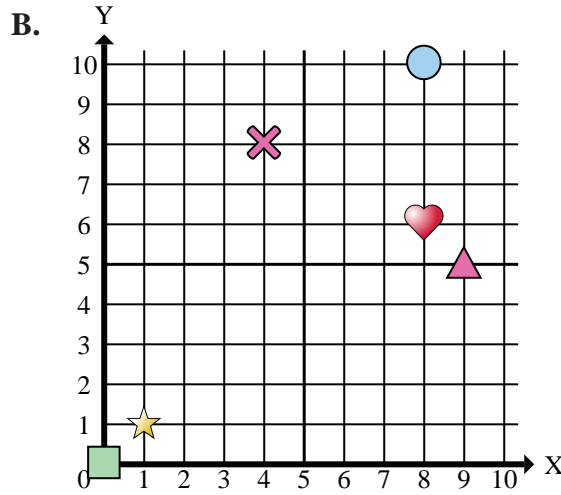
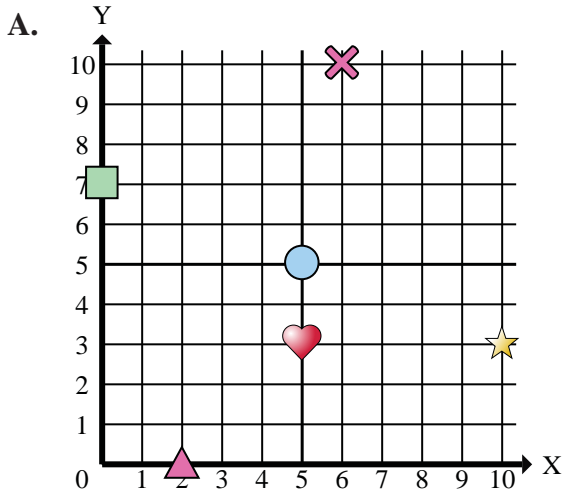
Answers

1. **B**
2. **D**
3. **D**
4. **A**
5. **A**
6. **B**
7. **B**
8. **C**
9. **A**
10. **B**
11. **C**
12. **D**
13. **A**
14. **C**
15. **D**

- 1) Which coordinate plane has a shape at (0 , 0)?
- 2) Which coordinate plane has a shape at (4 , 2)?
- 3) Which coordinate plane has a shape at (5 , 10)?
- 4) Which coordinate plane has a shape at (10 , 3)?
- 5) Which coordinate plane has a shape at (6 , 10)?
- 6) Which coordinate plane has a shape at (1 , 1)?
- 7) Which coordinate plane has a shape at (8 , 10)?
- 8) Which coordinate plane has a shape at (10 , 9)?
- 9) Which coordinate plane has a shape at (2 , 0)?
- 10) Which coordinate plane has a shape at (8 , 6)?
- 11) Which coordinate plane has a shape at (4 , 6)?
- 12) Which coordinate plane has a shape at (5 , 1)?
- 13) Which coordinate plane has a shape at (0 , 7)?
- 14) Which coordinate plane has a shape at (4 , 9)?
- 15) Which coordinate plane has a shape at (9 , 6)?



Determine which coordinate plane answers each question.



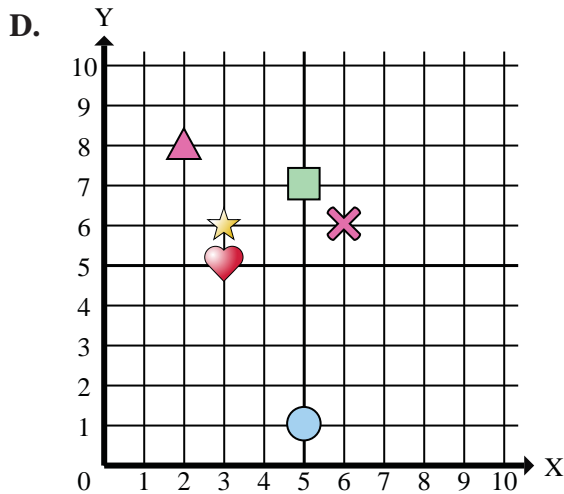
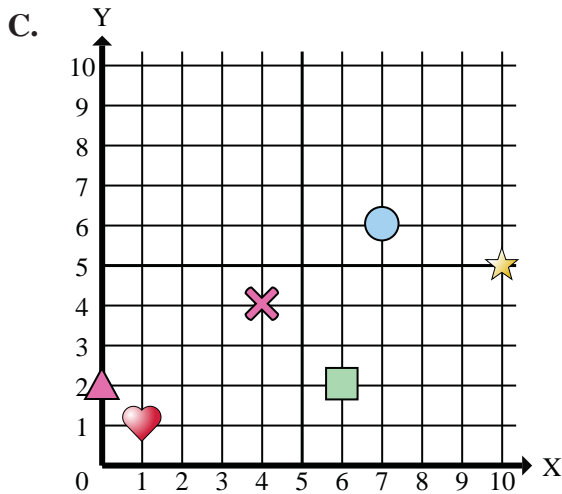
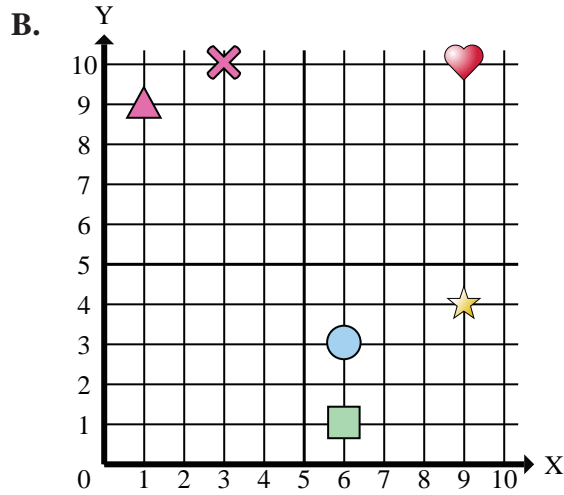
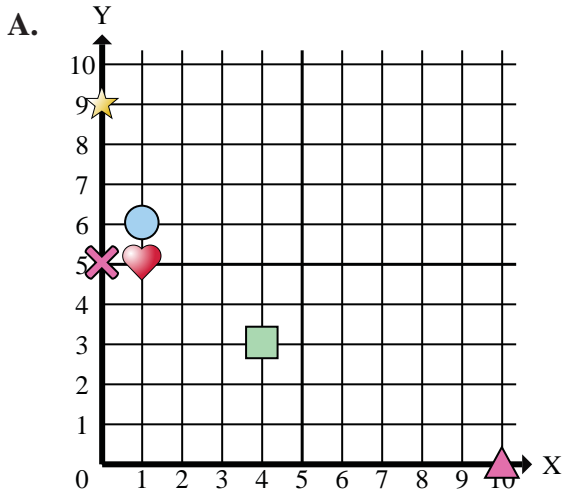
Answers

1. _____
2. _____
3. _____
4. _____
5. _____
6. _____
7. _____
8. _____
9. _____
10. _____

- 1) Which coordinate plane has a rectangle at (0 , 0)?
- 2) Which coordinate plane has a star at (4 , 2)?
- 3) Which coordinate plane has a circle at (5 , 10)?
- 4) Which coordinate plane has a star at (10 , 3)?
- 5) Which coordinate plane has a cross at (6 , 10)?
- 6) Which coordinate plane has a star at (1 , 1)?
- 7) Which coordinate plane has a circle at (8 , 10)?
- 8) Which coordinate plane has a cross at (10 , 9)?
- 9) Which coordinate plane has a triangle at (2 , 0)?
- 10) Which coordinate plane has a heart at (8 , 6)?



Determine which coordinate plane answers each question.



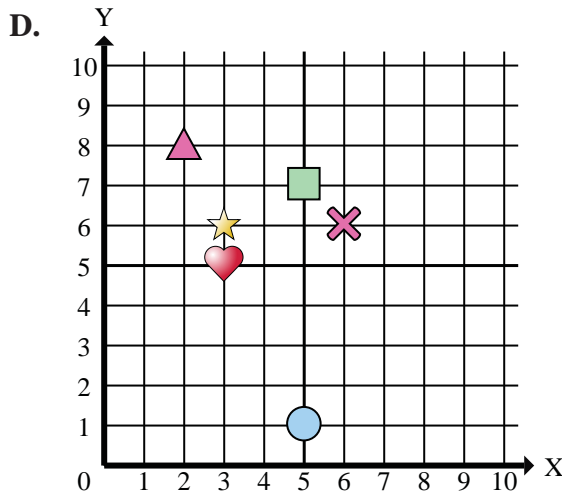
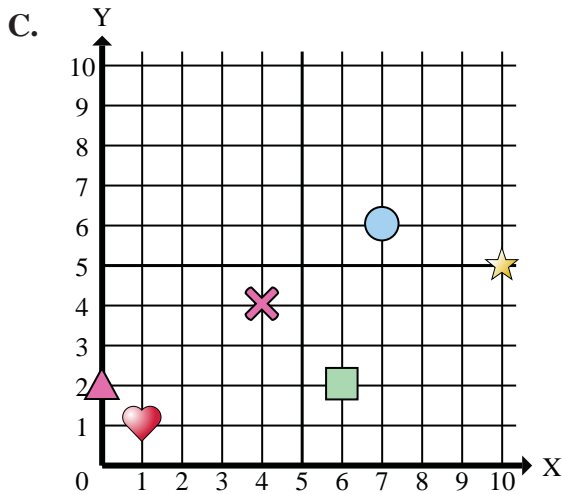
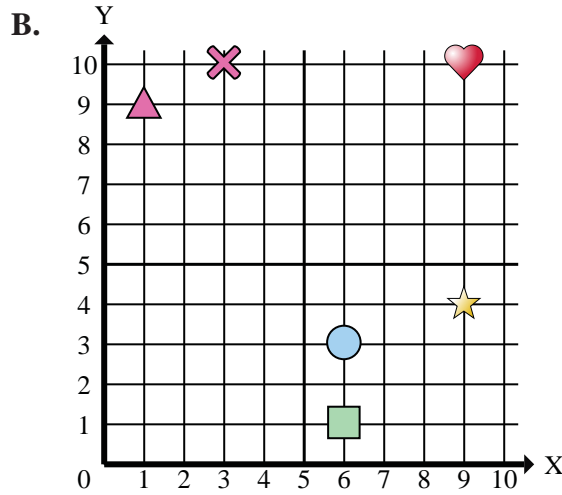
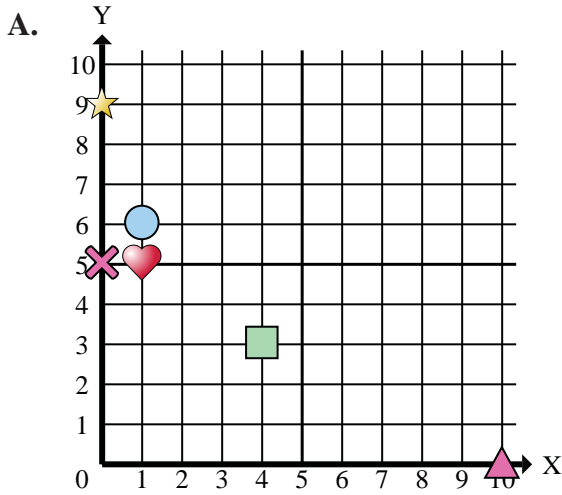
Answers

1. _____
2. _____
3. _____
4. _____
5. _____
6. _____
7. _____
8. _____
9. _____
10. _____
11. _____
12. _____
13. _____
14. _____
15. _____

- 1) Which coordinate plane has a shape at (6 , 1)?
- 2) Which coordinate plane has a shape at (10 , 5)?
- 3) Which coordinate plane has a shape at (4 , 4)?
- 4) Which coordinate plane has a shape at (4 , 3)?
- 5) Which coordinate plane has a shape at (3 , 10)?
- 6) Which coordinate plane has a shape at (6 , 2)?
- 7) Which coordinate plane has a shape at (10 , 0)?
- 8) Which coordinate plane has a shape at (3 , 5)?
- 9) Which coordinate plane has a shape at (7 , 6)?
- 10) Which coordinate plane has a shape at (1 , 9)?
- 11) Which coordinate plane has a shape at (3 , 6)?
- 12) Which coordinate plane has a shape at (2 , 8)?
- 13) Which coordinate plane has a shape at (9 , 10)?
- 14) Which coordinate plane has a shape at (0 , 2)?
- 15) Which coordinate plane has a shape at (0 , 9)?



Determine which coordinate plane answers each question.



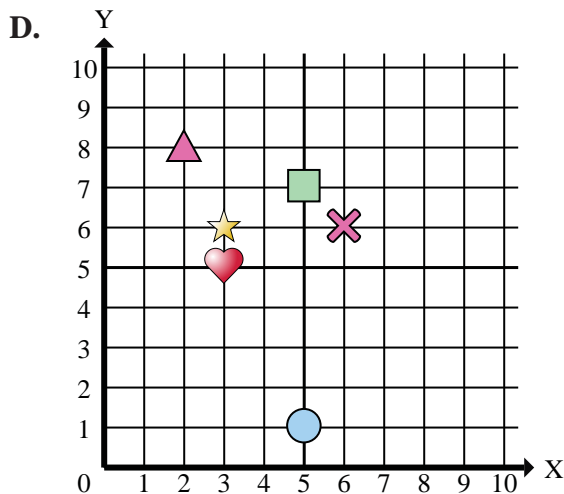
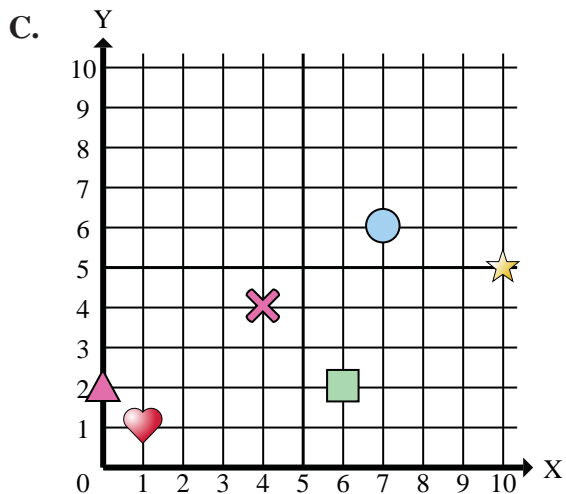
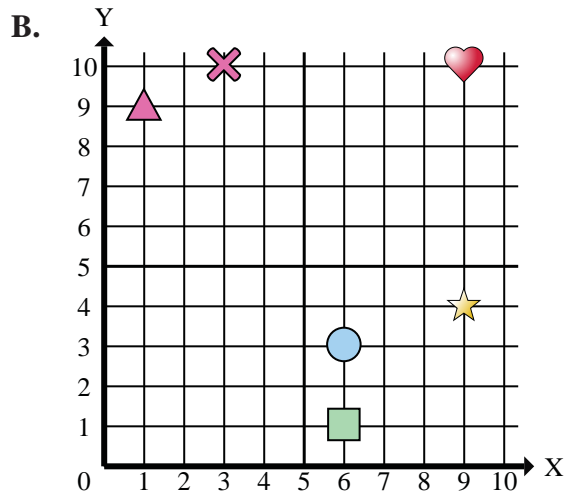
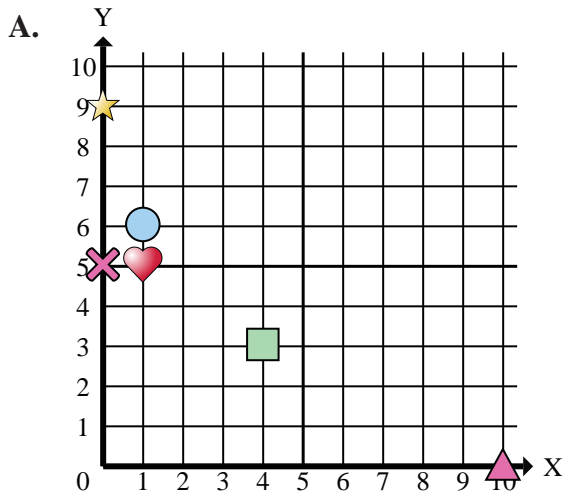
Answers

1. **B**
2. **C**
3. **C**
4. **A**
5. **B**
6. **C**
7. **A**
8. **D**
9. **C**
10. **B**
11. **D**
12. **D**
13. **B**
14. **C**
15. **A**

- 1) Which coordinate plane has a shape at (6 , 1)?
- 2) Which coordinate plane has a shape at (10 , 5)?
- 3) Which coordinate plane has a shape at (4 , 4)?
- 4) Which coordinate plane has a shape at (4 , 3)?
- 5) Which coordinate plane has a shape at (3 , 10)?
- 6) Which coordinate plane has a shape at (6 , 2)?
- 7) Which coordinate plane has a shape at (10 , 0)?
- 8) Which coordinate plane has a shape at (3 , 5)?
- 9) Which coordinate plane has a shape at (7 , 6)?
- 10) Which coordinate plane has a shape at (1 , 9)?
- 11) Which coordinate plane has a shape at (3 , 6)?
- 12) Which coordinate plane has a shape at (2 , 8)?
- 13) Which coordinate plane has a shape at (9 , 10)?
- 14) Which coordinate plane has a shape at (0 , 2)?
- 15) Which coordinate plane has a shape at (0 , 9)?



Determine which coordinate plane answers each question.



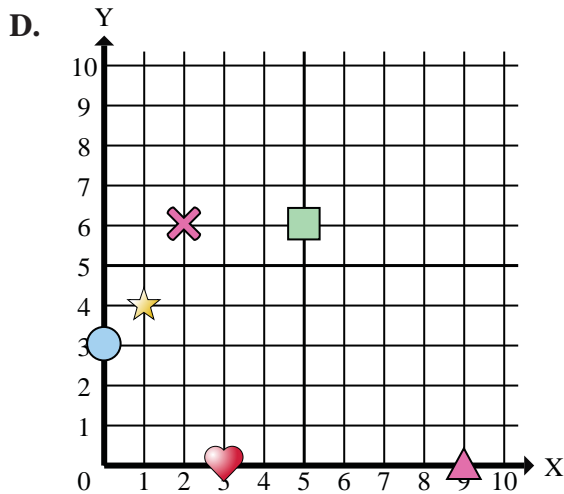
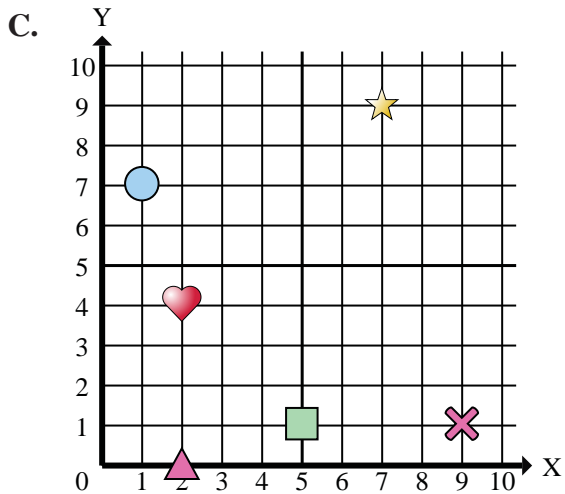
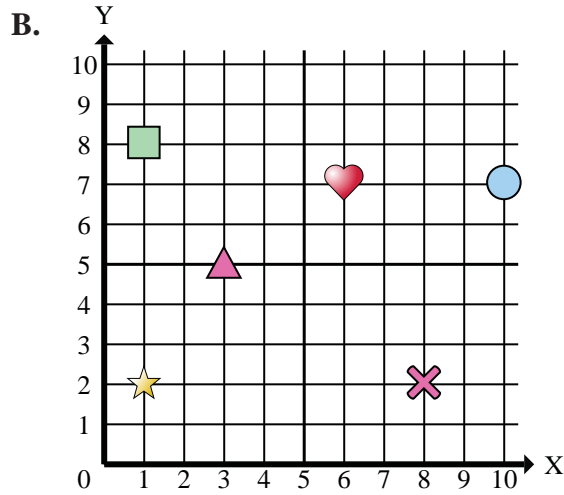
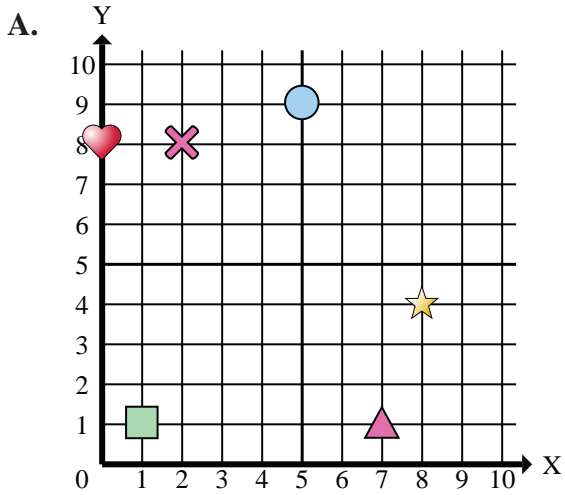
Answers

1. _____
2. _____
3. _____
4. _____
5. _____
6. _____
7. _____
8. _____
9. _____
10. _____

- 1) Which coordinate plane has a rectangle at (6 , 1)?
- 2) Which coordinate plane has a star at (10 , 5)?
- 3) Which coordinate plane has a cross at (4 , 4)?
- 4) Which coordinate plane has a rectangle at (4 , 3)?
- 5) Which coordinate plane has a cross at (3 , 10)?
- 6) Which coordinate plane has a rectangle at (6 , 2)?
- 7) Which coordinate plane has a triangle at (10 , 0)?
- 8) Which coordinate plane has a heart at (3 , 5)?
- 9) Which coordinate plane has a circle at (7 , 6)?
- 10) Which coordinate plane has a triangle at (1 , 9)?



Determine which coordinate plane answers each question.



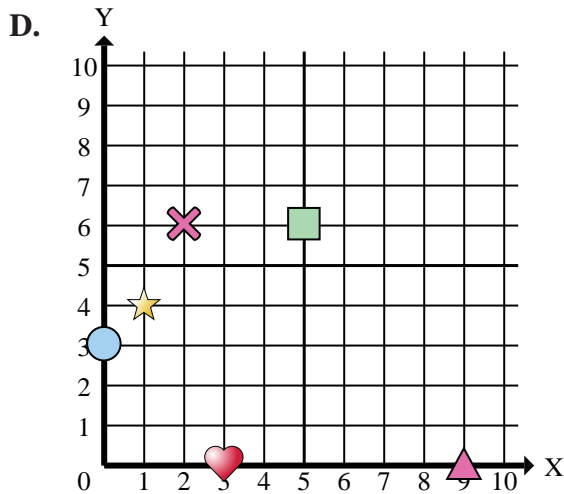
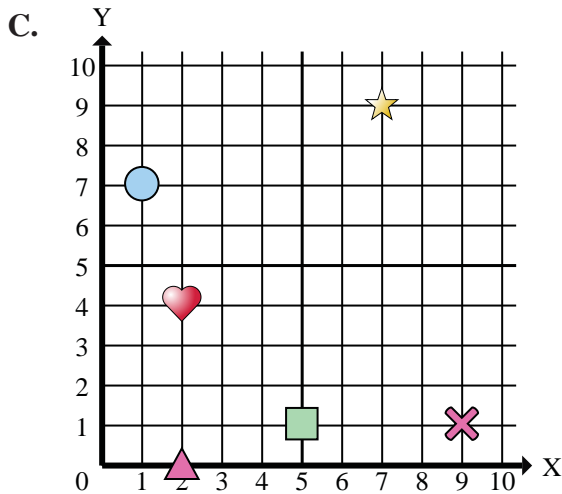
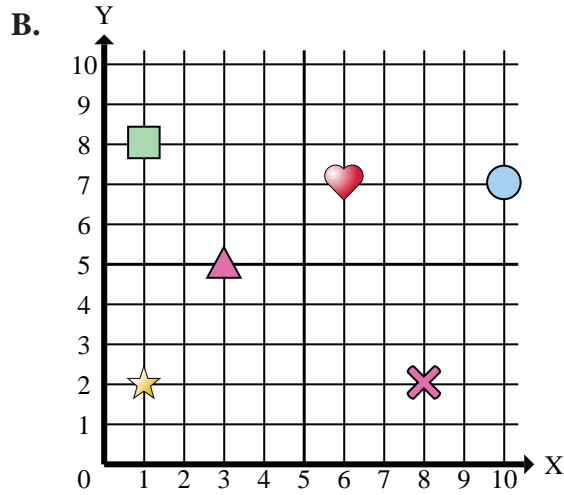
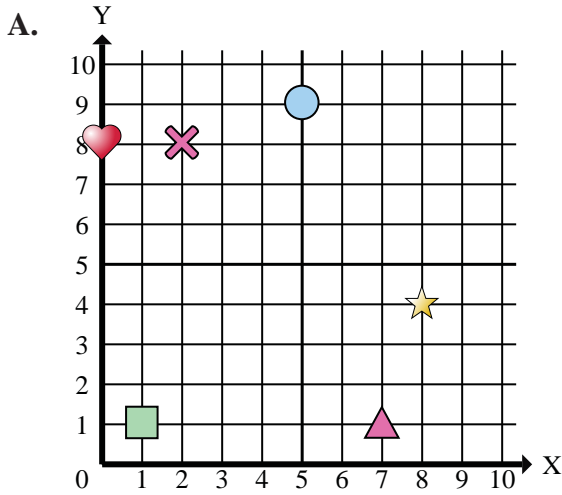
Answers

1. _____
2. _____
3. _____
4. _____
5. _____
6. _____
7. _____
8. _____
9. _____
10. _____
11. _____
12. _____
13. _____
14. _____
15. _____

- 1) Which coordinate plane has a shape at (9 , 0)?
- 2) Which coordinate plane has a shape at (2 , 0)?
- 3) Which coordinate plane has a shape at (1 , 1)?
- 4) Which coordinate plane has a shape at (3 , 5)?
- 5) Which coordinate plane has a shape at (8 , 2)?
- 6) Which coordinate plane has a shape at (2 , 4)?
- 7) Which coordinate plane has a shape at (7 , 1)?
- 8) Which coordinate plane has a shape at (5 , 1)?
- 9) Which coordinate plane has a shape at (2 , 8)?
- 10) Which coordinate plane has a shape at (7 , 9)?
- 11) Which coordinate plane has a shape at (10 , 7)?
- 12) Which coordinate plane has a shape at (9 , 1)?
- 13) Which coordinate plane has a shape at (1 , 8)?
- 14) Which coordinate plane has a shape at (2 , 6)?
- 15) Which coordinate plane has a shape at (8 , 4)?



Determine which coordinate plane answers each question.



- 1) Which coordinate plane has a shape at (9 , 0)?
- 2) Which coordinate plane has a shape at (2 , 0)?
- 3) Which coordinate plane has a shape at (1 , 1)?
- 4) Which coordinate plane has a shape at (3 , 5)?
- 5) Which coordinate plane has a shape at (8 , 2)?
- 6) Which coordinate plane has a shape at (2 , 4)?
- 7) Which coordinate plane has a shape at (7 , 1)?
- 8) Which coordinate plane has a shape at (5 , 1)?
- 9) Which coordinate plane has a shape at (2 , 8)?
- 10) Which coordinate plane has a shape at (7 , 9)?
- 11) Which coordinate plane has a shape at (10 , 7)?
- 12) Which coordinate plane has a shape at (9 , 1)?
- 13) Which coordinate plane has a shape at (1 , 8)?
- 14) Which coordinate plane has a shape at (2 , 6)?
- 15) Which coordinate plane has a shape at (8 , 4)?

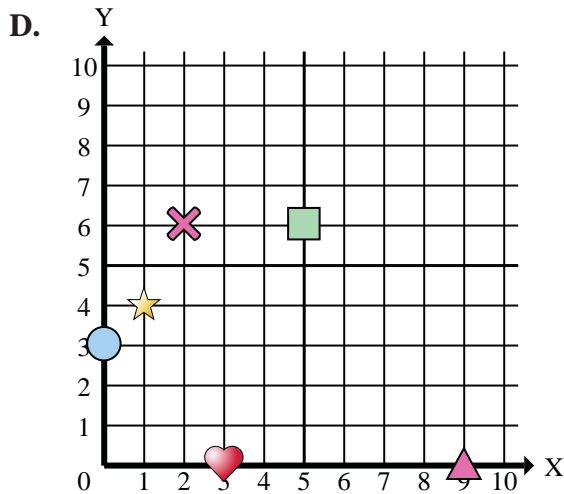
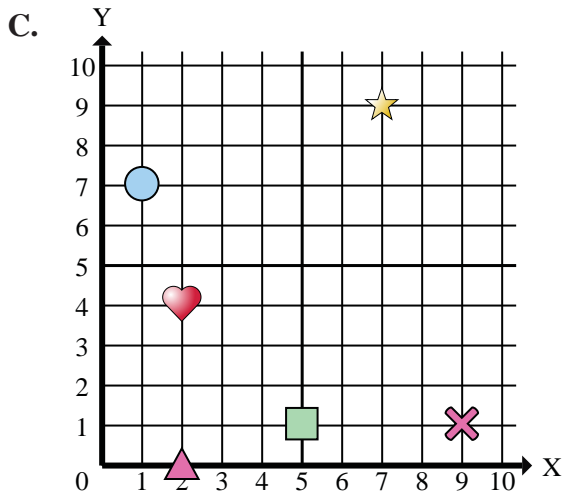
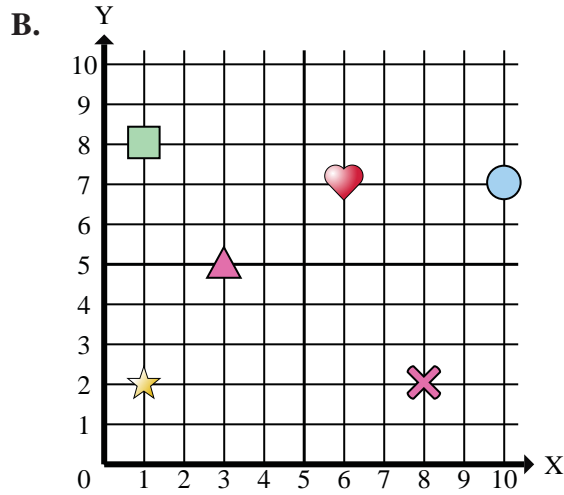
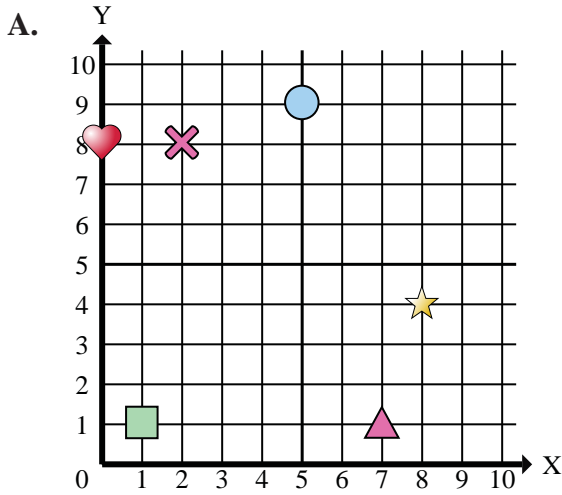
Answers

1. **D**
2. **C**
3. **A**
4. **B**
5. **B**
6. **C**
7. **A**
8. **C**
9. **A**
10. **C**
11. **B**
12. **C**
13. **B**
14. **D**
15. **A**



Determine which coordinate plane answers each question.

Answers

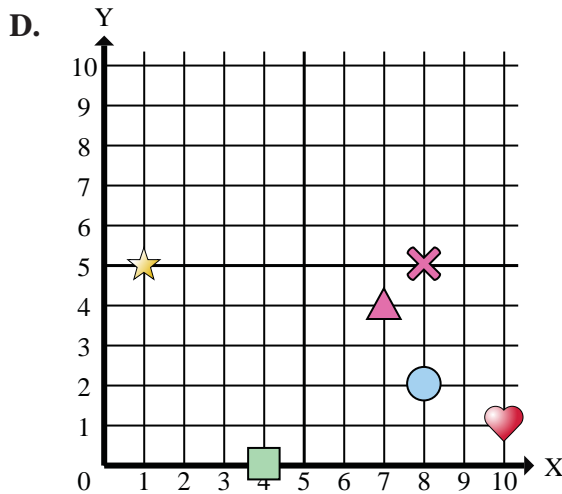
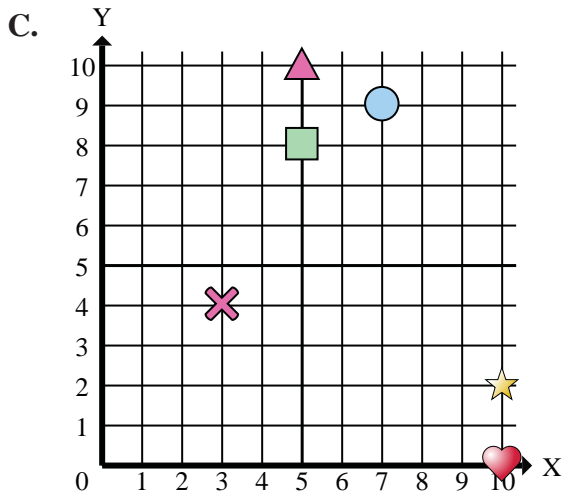
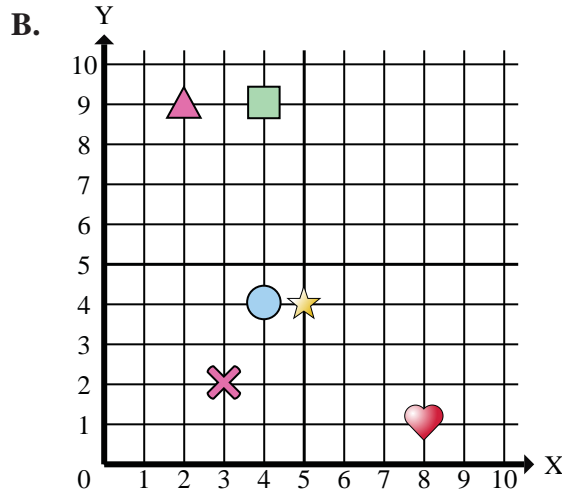
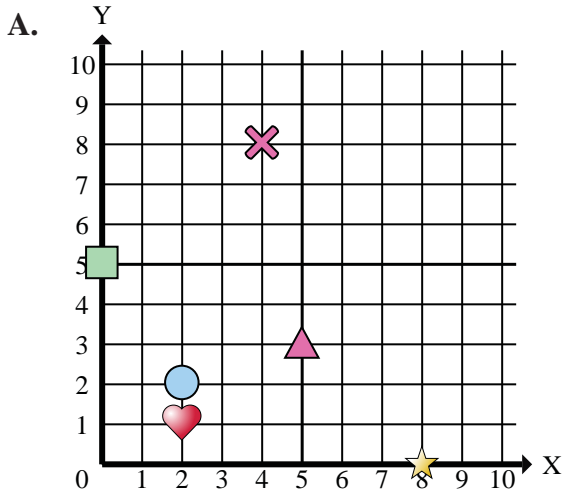


1. _____
2. _____
3. _____
4. _____
5. _____
6. _____
7. _____
8. _____
9. _____
10. _____

- 1) Which coordinate plane has a triangle at (9 , 0)?
- 2) Which coordinate plane has a triangle at (2 , 0)?
- 3) Which coordinate plane has a rectangle at (1 , 1)?
- 4) Which coordinate plane has a triangle at (3 , 5)?
- 5) Which coordinate plane has a cross at (8 , 2)?
- 6) Which coordinate plane has a heart at (2 , 4)?
- 7) Which coordinate plane has a triangle at (7 , 1)?
- 8) Which coordinate plane has a rectangle at (5 , 1)?
- 9) Which coordinate plane has a cross at (2 , 8)?
- 10) Which coordinate plane has a star at (7 , 9)?



Determine which coordinate plane answers each question.



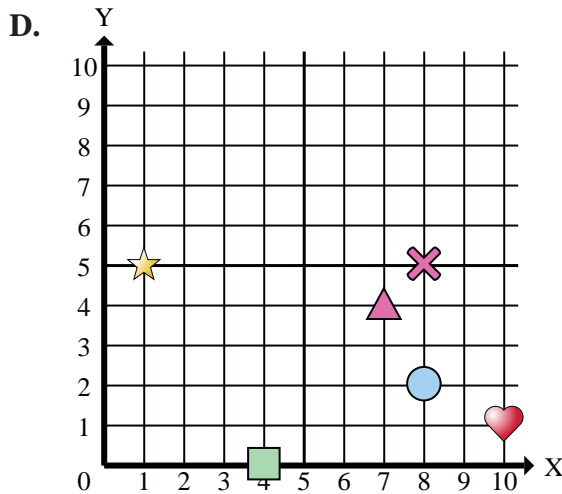
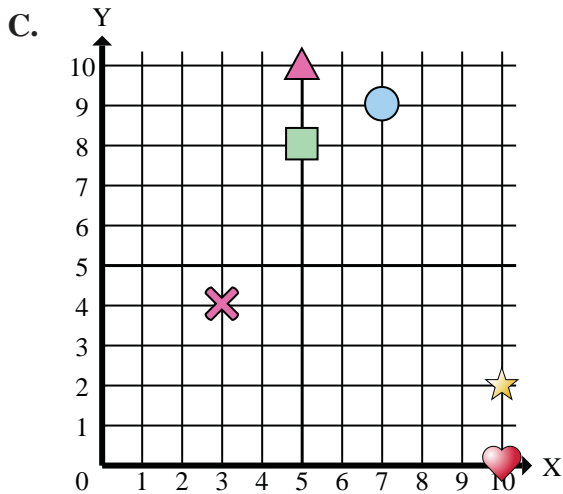
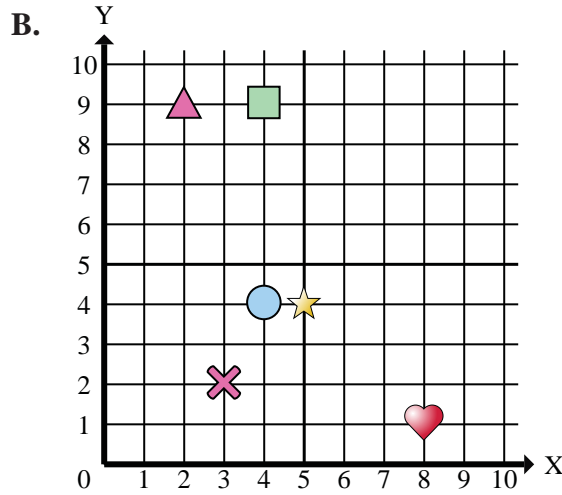
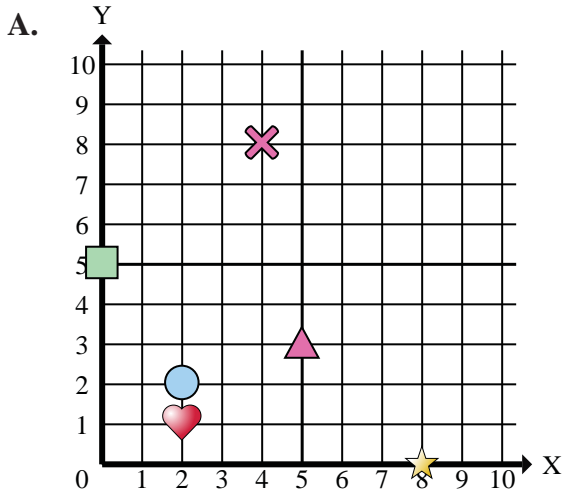
Answers

1. _____
2. _____
3. _____
4. _____
5. _____
6. _____
7. _____
8. _____
9. _____
10. _____
11. _____
12. _____
13. _____
14. _____
15. _____

- 1) Which coordinate plane has a shape at (3 , 4)?
- 2) Which coordinate plane has a shape at (7 , 9)?
- 3) Which coordinate plane has a shape at (3 , 2)?
- 4) Which coordinate plane has a shape at (2 , 2)?
- 5) Which coordinate plane has a shape at (4 , 9)?
- 6) Which coordinate plane has a shape at (10 , 0)?
- 7) Which coordinate plane has a shape at (8 , 2)?
- 8) Which coordinate plane has a shape at (10 , 2)?
- 9) Which coordinate plane has a shape at (4 , 0)?
- 10) Which coordinate plane has a shape at (8 , 5)?
- 11) Which coordinate plane has a shape at (1 , 5)?
- 12) Which coordinate plane has a shape at (5 , 3)?
- 13) Which coordinate plane has a shape at (4 , 8)?
- 14) Which coordinate plane has a shape at (2 , 1)?
- 15) Which coordinate plane has a shape at (8 , 0)?



Determine which coordinate plane answers each question.



Answers

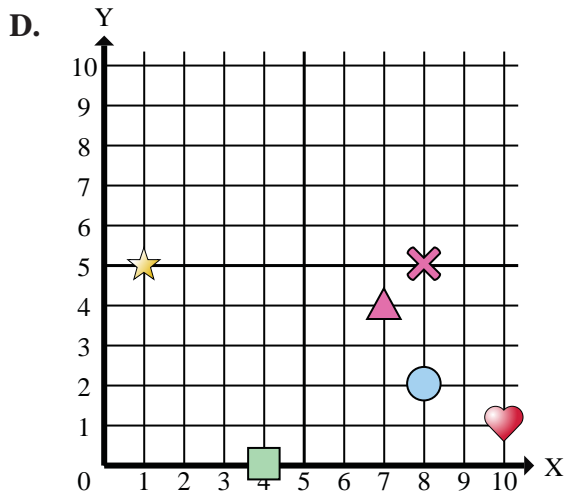
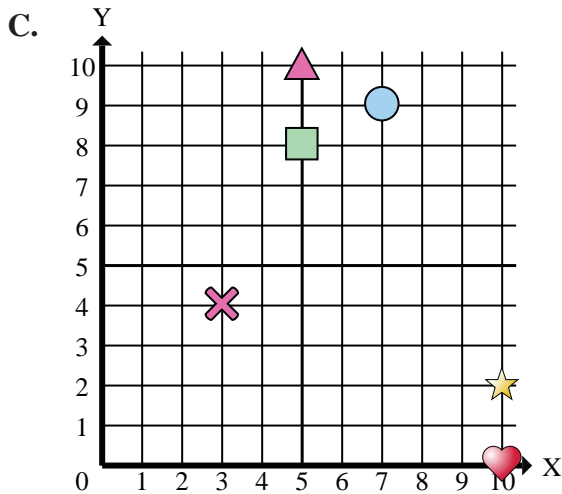
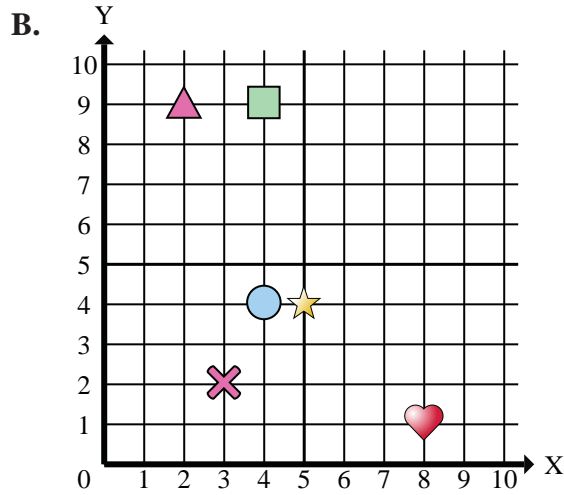
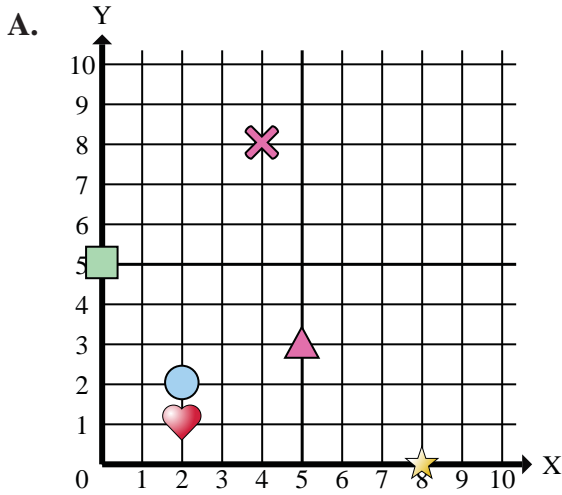
1. **C**
2. **C**
3. **B**
4. **A**
5. **B**
6. **C**
7. **D**
8. **C**
9. **D**
10. **D**
11. **D**
12. **A**
13. **A**
14. **A**
15. **A**

- 1) Which coordinate plane has a shape at (3 , 4)?
- 2) Which coordinate plane has a shape at (7 , 9)?
- 3) Which coordinate plane has a shape at (3 , 2)?
- 4) Which coordinate plane has a shape at (2 , 2)?
- 5) Which coordinate plane has a shape at (4 , 9)?
- 6) Which coordinate plane has a shape at (10 , 0)?
- 7) Which coordinate plane has a shape at (8 , 2)?
- 8) Which coordinate plane has a shape at (10 , 2)?
- 9) Which coordinate plane has a shape at (4 , 0)?
- 10) Which coordinate plane has a shape at (8 , 5)?
- 11) Which coordinate plane has a shape at (1 , 5)?
- 12) Which coordinate plane has a shape at (5 , 3)?
- 13) Which coordinate plane has a shape at (4 , 8)?
- 14) Which coordinate plane has a shape at (2 , 1)?
- 15) Which coordinate plane has a shape at (8 , 0)?



Determine which coordinate plane answers each question.

Answers



1. _____
2. _____
3. _____
4. _____
5. _____
6. _____
7. _____
8. _____
9. _____
10. _____

- 1) Which coordinate plane has a cross at (3 , 4)?
- 2) Which coordinate plane has a circle at (7 , 9)?
- 3) Which coordinate plane has a cross at (3 , 2)?
- 4) Which coordinate plane has a circle at (2 , 2)?
- 5) Which coordinate plane has a rectangle at (4 , 9)?
- 6) Which coordinate plane has a heart at (10 , 0)?
- 7) Which coordinate plane has a circle at (8 , 2)?
- 8) Which coordinate plane has a star at (10 , 2)?
- 9) Which coordinate plane has a rectangle at (4 , 0)?
- 10) Which coordinate plane has a cross at (8 , 5)?